



Name _____ Class _____ Date _____

1 The **circulatory system** pumps blood in two loops from the **heart to the lungs**, then back to the heart. This blood is pumped **to the body**, then back to the heart.

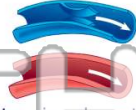
True or false?

- A true
- B false



2 **Arteries** and **veins** are similar since they both carry blood inside your body. How are **arteries and veins different?**

- A veins are not made of blood vessels, arteries are
- B arteries carry blood to heart, veins do not
- C arteries have thinner walls than veins
- D veins have valves, arteries do not



3 Which is true of a **capillary**?

- A it is the smallest type



4 Your **nose, trachea, lungs, and diaphragm** make up your **respiratory system**, which is the system in charge of _____.

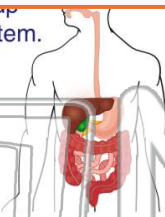


PREVIEW

Please [Sign In](#) or [Sign Up](#) to download the printable version of this worksheet

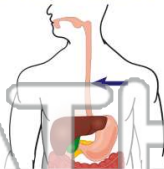
7 **Incisors** help make up your _____ system.

- A excretory
- B circulatory
- C respiratory
- D digestive



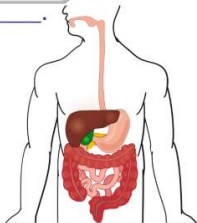
8 **Down a tube** from your mouth into your stomach. What is the name of this **tube**?

- A bronchi
- B esophagus
- C sinus passages
- D trachea



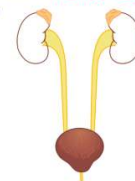
9 The **digestion of your food** occurs mostly in your _____.

- A large intestines
- B small intestines
- C stomach
- D esophagus



10 Your **urinary system** rids your body of waste that can poison your body. Which **organ** of the urinary system **removes waste from your blood**?

- A kidneys
- B heart
- C pancreas
- D liver





Name _____ Class _____ Date _____

1 The **circulatory system** pumps blood in two loops from the **heart to the lungs**, then back to the heart. This blood is pumped **to the body**, then back to the heart.

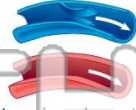
True or false?

- A true
- B false



2 **Arteries** and **veins** are similar since they both carry blood inside your body. How are **arteries** and **veins** different?

- A veins are not made of blood vessels, arteries are
- B arteries carry blood to heart, veins do not
- C arteries have thinner walls than veins
- D veins have valves, arteries do not



3 Which is true of a **capillary**?

- A it is the smallest type



4 Your **nose**, **trachea**, **lungs**, and **diaphragm** make up your **respiratory system**, which is the system in charge of _____.

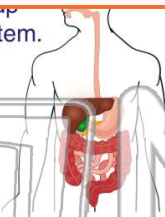


PREVIEW

Please [Sign In](#) or [Sign Up](#) to download the printable version of this worksheet

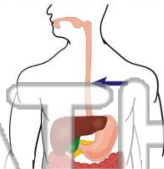
7 **Incisors** help make up your _____ system.

- A excretory
- B circulatory
- C respiratory
- D digestive



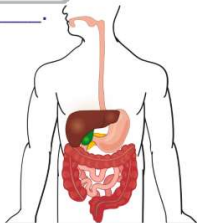
8 **Down a tube** from your **mouth** into your **stomach**. What is the name of this **tube**?

- A bronchi
- B esophagus
- C sinus passages
- D trachea



9 The **digestion of your food** occurs mostly in your _____.

- A large intestines
- B small intestines
- C stomach
- D esophagus



10 Your **urinary system** rids your body of waste that can poison your body. Which **organ** of the urinary system **removes waste from your blood**?

- A kidneys
- B heart
- C pancreas
- D liver

