




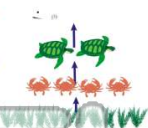
Name _____ Class _____ Date _____

1 Why is the clearing of trees **harmful** to an ecosystem?



- A it takes away fire hazards
- B trees can be used for firewood
- C it takes away animals' habitats
- D trees can be used as building material

2 There are **fewer animals** shown at the top of an **energy pyramid** because there _____.



- A is only room to show one animal
- B are fewer plants than animals
- C are more animals at the top
- D is less energy at the top

3 What does this energy pyramid show concerning **plants**?



- A an ecosystem only

4 Which organisms have the **most energy** in ecosystems?



5



PREVIEW


Please [Sign In](#) or [Sign Up](#) to download the printable version of this worksheet

7 In order to survive the winter:



- A sharp claws
- B two eyes
- C thick fur
- D ability to see in the dark

8 How does the number of organisms in their ecosystem?




- A that species increases its reproduction rate
- B the number of that species stays the same
- C the number of that species increases
- D that species becomes extinct

9 If a species is **endangered**, there is still hope for the species. If a species is **extinct**, _____.



- A it is still living
- B it is not in trouble
- C it is gone forever
- D there are a small number of organisms of that species

10 Paleontologists study **fossils** of animals that have died. This has shown scientists that **dinosaurs** are the **only** animals that have become **extinct**.



True or false?

A true B false



Name _____ Class _____ Date _____

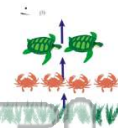
1 Why is the clearing of trees **harmful** to an ecosystem?

- A it takes away fire hazards
- B trees can be used for firewood
- C it takes away animals' habitats
- D trees can be used as building material



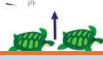
2 There are **fewer animals** shown at the top of an **energy pyramid** because there _____.

- A is only room to show one animal
- B are fewer plants than animals
- C are more animals at the top
- D is less energy at the top



3 What does this energy pyramid show concerning **plants**?

- A an ecosystem only



4 Which organisms have the **most energy** in ecosystems?



5



PREVIEW

Please [Sign In](#) or [Sign Up](#) to download the printable version of this worksheet

7

In order to survive the winter,

- A sharp claws
- B two eyes
- C thick fur
- D ability to see in the dark



their ecosystem?

- A that species increases its reproduction rate
- B the number of that species stays the same
- C the number of that species increases
- D that species becomes extinct



9

If a species is **endangered**, there is still hope for the species. If a species is **extinct**, _____.

- A it is still living
- B it is not in trouble
- C it is gone forever
- D there are a small number of organisms of that species



10

Paleontologists study **fossils** of animals that have died. This has shown scientists that **dinosaurs** are the **only** animals that have become **extinct**.



True or false?

- A true
- B false