



Name _____ Class _____ Date _____

1 What type of **root system** do **monocot plants**, such as grasses, usually have?

- A fibrous system
- B taproot system
- C short root system
- D no root system



2 Grass has **fibrous roots** and **parallel veins**, so it is an example of a **dicot**.

True or false?

- A true
- B false



3 What type of plant has **two cotyledons** in its seed?



4 Which of the two plants is an example of a **dicot**?



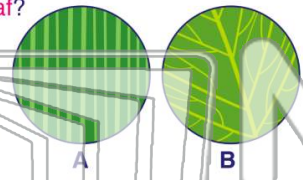
5

PREVIEW

Please [Sign In](#) or [Sign Up](#) to download the printable version of this worksheet

7 A lens is showing a **magnified view** of a **dicot leaf**?

- A lens A
- B lens B
- C neither
- D both




8 How many **cotyledons** does it have?

- A one
- B two
- C four
- D no



9 A **rose** is an example of a _____ plant.

- A gymnosperm
- B nonvascular
- C monocot
- D dicot



10 What **type of plant** is pictured below?

- A gymnosperm
- B nonvascular
- C monocot
- D dicot





Name _____ Class _____ Date _____

1 What type of **root system** do **monocot plants**, such as grasses, usually have?

- A fibrous system
- B taproot system
- C short root system
- D no root system



2 Grass has **fibrous roots** and **parallel veins**, so it is an example of a **dicot**.

True or false?

- A true
- B false



3 What type of plant has **two cotyledons** in its seed?



4 Which of the two plants is an example of a **dicot**?



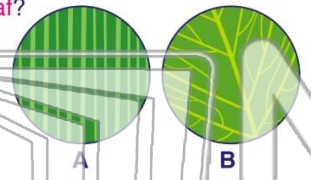


PREVIEW

Please [Sign In](#) or [Sign Up](#) to download the printable version of this worksheet

7 A lens is showing a **magnified view** of a **dicot leaf**?

- A lens A
- B lens B
- C neither
- D both




8 How many **cotyledons** does it have?

- A one
- B two
- C four
- D no



9 A **rose** is an example of a _____ plant.

- A gymnosperm
- B nonvascular
- C monocot
- D dicot



10 What **type of plant** is pictured below?

- A gymnosperm
- B nonvascular
- C monocot
- D dicot

