

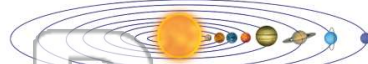


Name \_\_\_\_\_ Class \_\_\_\_\_ Date \_\_\_\_\_

- 1 Which defines the word **planet**?
- A a large body that revolves around the Moon
  - B a large body that is suitable for life
  - C a large body that contains water and land
  - D a large body that revolves around the Sun



- 2 What is true of **all planets**?
- A all rotate at the same speed
  - B all rotate and revolve around the Sun
  - C all have their own moons
  - D all rotate and revolve around the Moon



- 3 This illustration shows the planets in their correct order from the Sun. Which planet is the **largest**?

- 4 This planet is the **closest** planet to the Sun. It is also the **smallest** planet in the solar system. Which planet is being



5

## PREVIEW

Please [Sign In](#) or [Sign Up](#) to download the printable version of this worksheet

- 7
- Solar system that can support life.
- A Venus
  - B Mercury
  - C Earth
  - D Mars



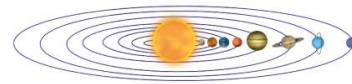
- Sun and has a **thin atmosphere**, which is made up of mostly of **carbon dioxide**.
- A Venus
  - B Jupiter
  - C Mercury
  - D Mars



- 9 **Mars** is nicknamed the "**red planet**." What gives Mars its red appearance?
- A the reflection of sunlight
  - B the iron in its surface
  - C the reflection of its moon's light
  - D the copper in its surface



- 10 Which of these are known as the **inner planets**?
- A Mercury, Venus, Earth, Mars
  - B Jupiter, Saturn, Uranus, Neptune
  - C Saturn, Uranus, Neptune, Pluto
  - D Venus, Earth, Mars, and Jupiter






Name \_\_\_\_\_ Class \_\_\_\_\_ Date \_\_\_\_\_

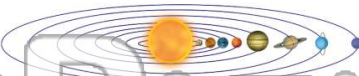
1 Which defines the word **planet**?

**A** a large body that revolves around the Moon  
**B** a large body that is suitable for life  
**C** a large body that contains water and land  
**D** a large body that revolves around the Sun



2 What is true of **all planets**?

**A** all rotate at the same speed  
**B** all rotate and revolve around the Sun  
**C** all have their own moons  
**D** all rotate and revolve around the Moon



3 This illustration shows the planets in their correct order from the Sun. Which planet is the **largest**?

4 This planet is the **closest** planet to the Sun. It is also the **smallest** planet in the solar system. Which planet is being



**PREVIEW**

Please [Sign In](#) or [Sign Up](#) to download the printable version of this worksheet


7 Solar system that can support life.

**A** Venus  
**B** Mercury  
**C** Earth  
**D** Mars



Sun and has a **thin atmosphere**, which is made up of mostly of **carbon dioxide**.

**A** Venus  
**B** Jupiter  
**C** Mercury  
**D** Mars



9 **Mars** is nicknamed the "**red planet**." What gives Mars its red appearance?

**A** the reflection of sunlight  
**B** the iron in its surface  
**C** the reflection of its moon's light  
**D** the copper in its surface



10 Which of these are known as the **inner planets**?

**A** Mercury, Venus, Earth, Mars  
**B** Jupiter, Saturn, Uranus, Neptune  
**C** Saturn, Uranus, Neptune, Pluto  
**D** Venus, Earth, Mars, and Jupiter

