



Name _____ Class _____ Date _____

1

Math Challenge: Matt knew that the school's doorway was **3 meters** tall. He converted this to equal **300 centimeters**. Based on Matt's calculations, how many centimeters are in 1 meter?

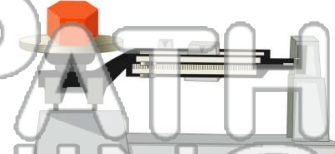
- A 30
- B 100
- C 1,000
- D 10



2

Math Challenge: If **1 kilogram** is equal to **1,000 grams**, how many grams are there in **5 kilograms**?

- A 50
- B 1,000
- C 5,000
- D 500



3

Math Challenge: Casey's bike odometer told her she rode **14,000 meters**.

How many kilometers did Casey ride?

4

Math Challenge: Damien's science teacher told him that **150° Celsius** equals **423° Kelvin**. How did the teacher convert Celsius to Kelvin?



5



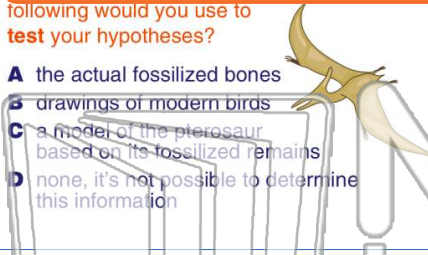
PREVIEW

Please [Sign In](#) or [Sign Up](#) to download the printable version of this worksheet

7

Which of the following would you use to test your hypotheses?

- A the actual fossilized bones
- B drawings of modern birds
- C a model of the pterosaur based on its fossilized remains
- D none, it's not possible to determine this information



To safely collect rock samples with a hammer and chisel, always _____.

- A close your eyes tightly
- B look away
- C point the chisel down to eliminate rock chips
- D wear eye protection



9

Geologists need to be aware of taking all appropriate safety precautions to protect eyes, skin, limbs, and even clothing.

True or false?

- A true
- B false



10

Which of the following are new technologies that have helped geologists discover new information and come to new hypotheses?

- A medical machines like CAT scan machines
- B deep sea submersibles (remote-controlled submarines)
- C computers
- D all of the above





Name _____ Class _____ Date _____

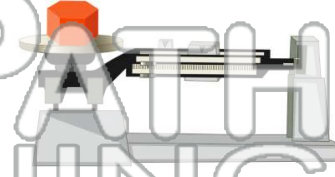
1 Math Challenge: Matt knew that the school's doorway was **3 meters** tall. He converted this to equal **300 centimeters**. **Based on Matt's calculations, how many centimeters are in 1 meter?**

- A 30
- B 100
- C 1,000
- D 10



2 Math Challenge: If **1 kilogram** is equal to **1,000 grams**, how many **grams** are there in **5 kilograms**?

- A 50
- B 1,000
- C 5,000
- D 500



3 Math Challenge: Casey's bike odometer told her she rode **14,000 meters**.
How many kilometers did Casey ride?

4 Math Challenge: Damien's science teacher told him that **150° Celsius** equals **423° Kelvin**.
How did the teacher convert Celsius to Kelvin?



PREVIEW

Please [Sign In](#) or [Sign Up](#) to download the printable version of this worksheet

7 **Which of the following would you use to test your hypotheses?**

- A the actual fossilized bones
- B drawings of modern birds
- C a model of the pterosaur based on its fossilized remains
- D none, it's not possible to determine this information



To **safely** collect rock samples with a hammer and chisel, always _____.

- A close your eyes tightly
- B look away
- C point the chisel down to eliminate rock chips
- D wear eye protection



9 Geologists need to be aware of taking all appropriate **safety precautions** to protect eyes, skin, limbs, and even clothing.
True or false?

- A true
- B false



10 Which of the following are **new technologies** that have helped geologists discover new information and come to new hypotheses?

- A medical machines like CAT scan machines
- B deep sea submersibles (remote-controlled submarines)
- C computers
- D all of the above

