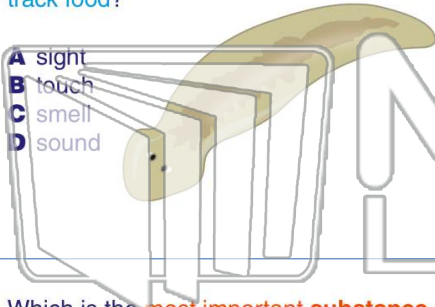




Name _____ Class _____ Date _____

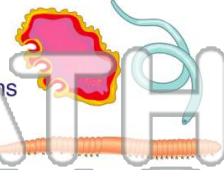
1 What **sense** do planarians use most to track food?

- A sight
- B touch
- C smell
- D sound



2 Which group of animals is thought to be the most **abundant** animals on earth?

- A humans
- B flatworms
- C segmented worms
- D roundworms



3 Which is the **most important substance** in a roundworm's environment?

4 Roundworms have a _____ **digestive tract**.

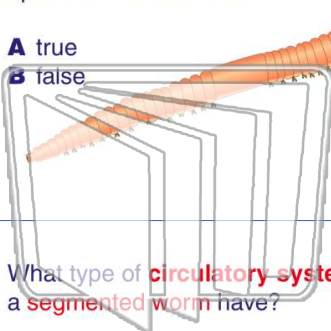


PREVIEW

Please [Sign In](#) or [Sign Up](#) to download the printable version of this worksheet

7 up of different sections.

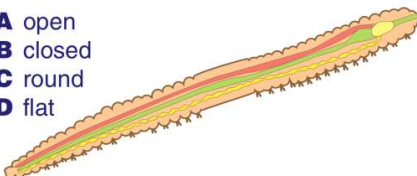
- A true
- B false



- A a heart
- B an anus
- C nerves
- D reproductive organs

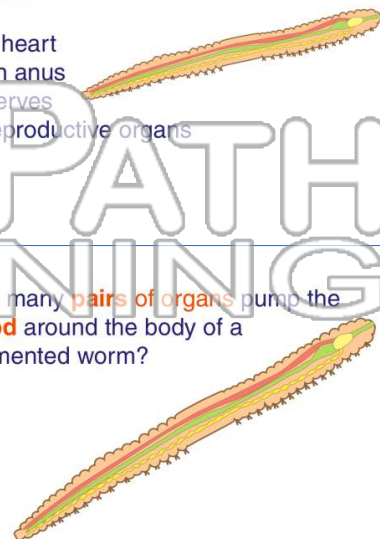
9 What type of **circulatory system** does a **segmented worm** have?

- A open
- B closed
- C round
- D flat



10 How many **pairs of organs** pump the **blood** around the body of a segmented worm?

- A 2
- B 3
- C 6
- D 8

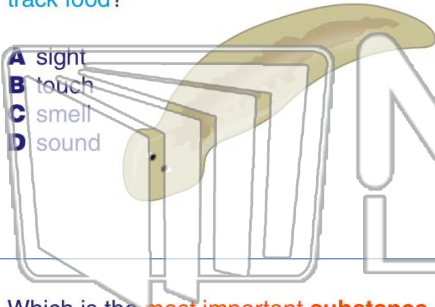




Name _____ Class _____ Date _____

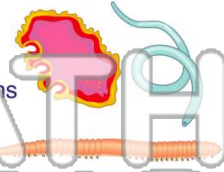
1 What **sense** do planarians use most to track food?

- A sight
- B touch
- C smell
- D sound



2 Which group of animals is thought to be the most **abundant** animals on earth?

- A humans
- B flatworms
- C segmented worms
- D roundworms



3 Which is the **most important substance** in a roundworm's environment?

4 Roundworms have a _____ **digestive tract**.

(B)

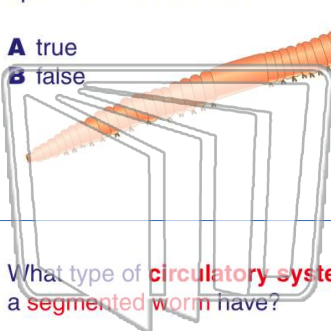
(B)

5

7

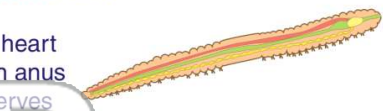
up of different sections.

- A true
- B false



(A)

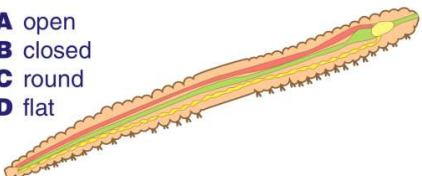
- A a heart
- B an anus
- C nerves
- D reproductive organs



(C)

9 What type of **circulatory system** does a **segmented worm** have?

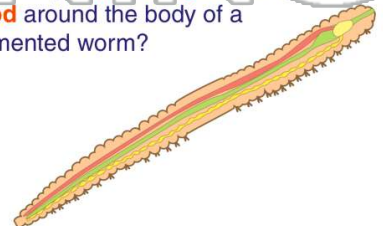
- A open
- B closed
- C round
- D flat



(B)

10 How many **pairs of organs** pump the **blood** around the body of a segmented worm?

- A 2
- B 3
- C 6
- D 8



(B)