

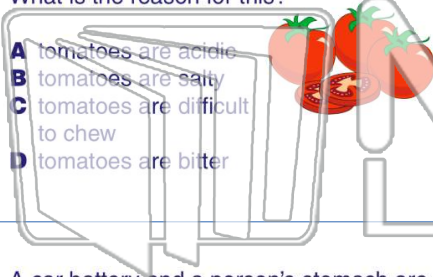


Name \_\_\_\_\_ Class \_\_\_\_\_ Date \_\_\_\_\_

1

A person who has stomach ulcers should **avoid eating tomatoes**. What is the reason for this?

- A tomatoes are acidic
- B tomatoes are salty
- C tomatoes are difficult to chew
- D tomatoes are bitter



2

A flashlight **battery** left inside a flashlight for too long begins to **corrode** the battery contacts. What is the reason for this?

- A water causes the corrosion
- B batteries have acid inside
- C batteries get weaker with time
- D salt causes the corrosion



3

A car battery and a person's stomach are **similar** in what way?



4

Which of the following substances mixes with the food in our **stomach** to help **digestion**?

5



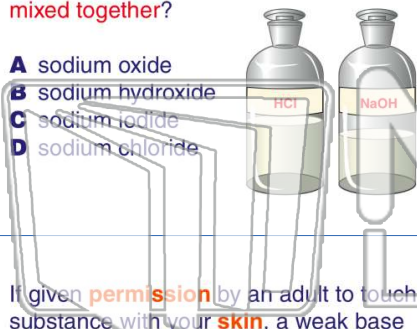
## PREVIEW

Please [Sign In](#) or [Sign Up](#) to download the printable version of this worksheet

7

mixed together?

- A sodium oxide
- B sodium hydroxide
- C sodium iodide
- D sodium chloride



To determine what is in the bottle, the student should \_\_\_\_\_.

- A taste the substance
- B touch the substance
- C use an indicator
- D mix it with another chemical



9

If given **permission** by an adult to touch a substance with your **skin**, a weak base between your fingers would **feel** \_\_\_\_\_.

- A cold
- B sticky
- C slimy and slippery
- D like sand



10

**Acid rain** forms when \_\_\_\_\_.

- A air pollutants combine with water vapor
- B acid mixes with rain in gutters
- C rain reaches the ground
- D a thunderstorm occurs



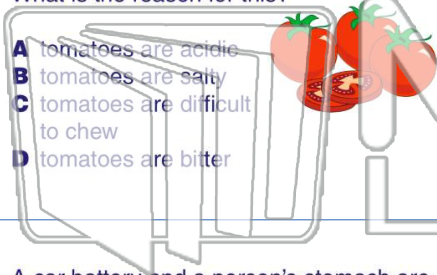


Name \_\_\_\_\_ Class \_\_\_\_\_ Date \_\_\_\_\_

1

A person who has stomach ulcers should **avoid eating tomatoes**. What is the reason for this?

- A tomatoes are acidic
- B tomatoes are salty
- C tomatoes are difficult to chew
- D tomatoes are bitter



2

A flashlight **battery** left inside a flashlight for too long begins to **corrode** the battery contacts. What is the reason for this?

- A water causes the corrosion
- B batteries have acid inside
- C batteries get weaker with time
- D salt causes the corrosion



3

A car battery and a person's stomach are **similar** in what way?



4

Which of the following substances mixes with the food in our **stomach** to help **digestion**?

5



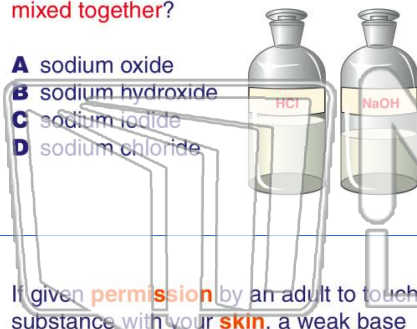
## PREVIEW

Please [Sign In](#) or [Sign Up](#) to download the printable version of this worksheet

7

mixed together?

- A sodium oxide
- B sodium hydroxide
- C sodium iodide
- D sodium chloride



To determine what is in the bottle, the student should \_\_\_\_\_.

- A taste the substance
- B touch the substance
- C use an indicator
- D mix it with another chemical



9

If given **permission** by an adult to touch a substance with your **skin**, a weak base between your fingers would **feel** \_\_\_\_\_.

- A cold
- B sticky
- C slimy and slippery
- D like sand



10

**Acid rain** forms when \_\_\_\_\_.

- A air pollutants combine with water vapor
- B acid mixes with rain in gutters
- C rain reaches the ground
- D a thunderstorm occurs

