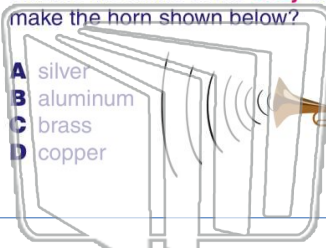




Name _____ Class _____ Date _____

1

An alloy is the result of the **combination** of **at least** one metal with other substances. What is the name of the **alloy** used to make the horn shown below?



- A silver
- B aluminum
- C brass
- D copper

2

A **jet engine** produces a(n) _____ reaction to **propel** the jet forward.

- A endothermic
- B physical
- C mechanical
- D exothermic



3

What **causes** the **release of heat** from a jet engine?



4

In an **alloy**, at least one of the **elements** in the mixture is a _____.

5

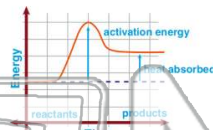


PREVIEW

Please [Sign In](#) or [Sign Up](#) to download the printable version of this worksheet

7

- A heat was released
- B heat was absorbed
- C the products finished with less energy than the reactants
- D the products finished with the same energy as the reactants



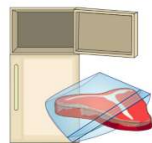
- A breathing and use of oxygen
- B digestion and burning of food
- C production of carbon dioxide
- D production of water



9

When food is stored in a freezer, but **not wrapped properly**, it may get spoiled by "**freezer burn**." This is caused by _____.

- A the freezer breaking
- B water from the food freezing unevenly
- C putting food under ice cubes
- D high amounts of carbon in the freezer



10

A **food additive** is a chemical that is _____.

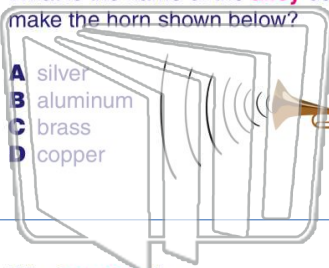
- A added to food
- B used to make food grow
- C removed from food
- D used to make food less sweet





Name _____ Class _____ Date _____

- 1 An alloy is the result of the **combination** of **at least** one metal with other substances. What is the name of the **alloy** used to make the horn shown below?



- A silver
- B aluminum
- C brass
- D copper

- 2 A **jet engine** produces a(n) _____ reaction to **propel** the jet forward.

- A endothermic
- B physical
- C mechanical
- D exothermic



- 3 What **causes** the **release of heat** from a jet engine?



- 4 In an **alloy**, at least one of the **elements** in the mixture is a _____.

5

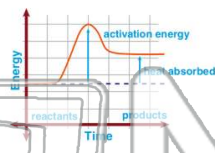


PREVIEW

Please [Sign In](#) or [Sign Up](#) to download the printable version of this worksheet

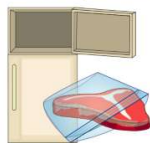
7

- A heat was released
 B heat was absorbed
 C the products finished with less energy than the reactants
 D the products finished with the same energy as the reactants



- 9 When food is stored in a freezer, but **not wrapped properly**, it may get spoiled by "**freezer burn**." This is caused by _____.

- A the freezer breaking
- B water from the food freezing unevenly
- C putting food under ice cubes
- D high amounts of carbon in the freezer



- 10 A **food additive** is a chemical that is _____.

- A added to food
- B used to make food grow
- C removed from food
- D used to make food less sweet

