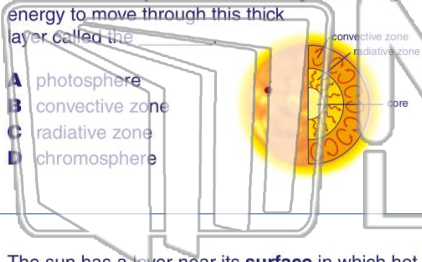




Name _____ Class _____ Date _____

- 1 The core is the center of the sun where the sun's heat energy is produced. This heat moves from the core through a **very dense layer**. It is so dense that it can literally take **millions of years** for light energy to move through this thick layer called the _____.
- A** photosphere
B convective zone
C radiative zone
D chromosphere



- 2 The sun's **energy** is produced by _____.
- A** burning hydrogen atoms in the sun's photosphere
B burning hydrogen atoms in the sun's radiative zone
C nuclear fusion reactions in the sun's core
D nuclear fission reactions in the sun's core



- 3 The sun has a layer near its **surface** in which hot gases rise toward the surface, then get relatively cool causing them to descend back into the sun. This **rising and falling** of hotter and cooler gases _____.

- 4 The **surface** of the sun that we are able to see is called the _____.
- A** photosphere



PREVIEW

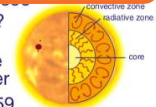
Please [Sign In](#) or [Sign Up](#) to download the printable version of this worksheet

- 7 _____ storms can reach temperatures exceeding 8 million degrees Celsius! These sun storms are called _____.



- A** solar flares
B sun spots
C the corona
D the photosphere

_____ in the sky on **January 2** and why?



- A** dim sunlight; the sun would be dramatically smaller and cooler
B the same sun as it was at 11:59 on January 1; energy from the core takes many years to reach the surface
C a red giant star; when a star dies, it expands into a cooler star
D darkness; the sun would have burned out

- 9 By definition, one **astronomical unit** (1 AU) is approximately 150,000,000 kilometers. An astronomical unit is the **average distance** _____.



- A** from the center of the Sun to the center of Neptune
B from the Sun to Earth
C traveled by light in one second
D a fuel tank lasts during space travel

- 10 The **inner planets** include Mercury, Venus, Earth, and Mars. They are also known as the _____.

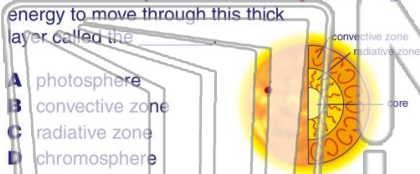


- A** gaseous planets
B tectonic planets
C terrestrial planets
D lunar planets



Name _____ Class _____ Date _____

1 The core is the center of the sun where the sun's heat energy is produced. This heat moves from the core through a **very dense layer**. It is so dense that it can literally take **millions of years** for light energy to move through this thick layer called the _____.



- A photosphere
- B convective zone
- C radiative zone
- D chromosphere

2 The sun's **energy** is produced by _____.

- A burning hydrogen atoms in the sun's photosphere
- B burning hydrogen atoms in the sun's radiative zone
- C nuclear fusion reactions in the sun's core
- D nuclear fission reactions in the sun's core



3 The sun has a layer near its **surface** in which hot gases rise toward the surface, then get relatively cool causing them to descend back into the sun. This **rising and falling** of hotter and cooler gases _____.

4 The **surface** of the sun that we are able to see is called the _____.

- A photosphere



PREVIEW

Please [Sign In](#) or [Sign Up](#) to download the printable version of this worksheet

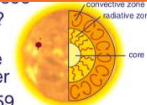
7 storms can reach temperatures exceeding 8 million degrees Celsius! These sun storms are called _____.



- A solar flares
- B sun spots
- C the corona
- D the photosphere

8 Why would the sun look different in the sky on **January 2** and why?

- A dim sunlight; the sun would be dramatically smaller and cooler
- B the same sun as it was at 11:59 on January 1; energy from the core takes many years to reach the surface
- C a red giant star; when a star dies, it expands into a cooler star
- D darkness; the sun would have burned out



9 By definition, one **astronomical unit** (1 AU) is approximately 150,000,000 kilometers. An astronomical unit is the **average distance** _____.



- A from the center of the Sun to the center of Neptune
- B from the Sun to Earth
- C traveled by light in one second
- D a fuel tank lasts during space travel

10 The **inner planets** include Mercury, Venus, Earth, and Mars. They are also known as the _____.

- A gaseous planets
- B tectonic planets
- C terrestrial planets
- D lunar planets

