



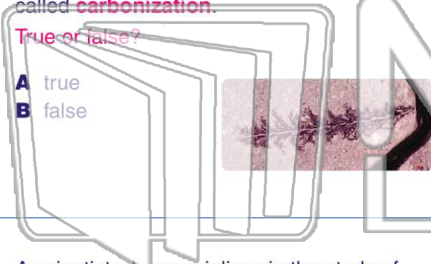
Name _____ Class _____ Date _____

1

When **leaves** are preserved in the rock record, they are usually preserved as a very thin film of black carbon. This process is called **carbonization**.

True or false?

- A true
- B false



2

Fossils of organisms that lived in a very **specific time period** for a relatively short period of time are called **index fossils**. **How do paleontologists use index fossils?**

- A make a mold to identify fossils of the same shape
- B follow a trail of footprints to lead to complete skeletons in the rock
- C estimate the date when that fossil and surrounding rock were formed
- D identify what that animal may have eaten

3

A scientist who specializes in the study of **fossils, ancient life, and ancient environments** is called a(n) _____.

4

A paleontologist has discovered fossils **on top of a mountain**. The fossils include trilobites, crinoids, brachiopods, and bivalves (like clams). This fossil assemblage reveals that the ocean

5



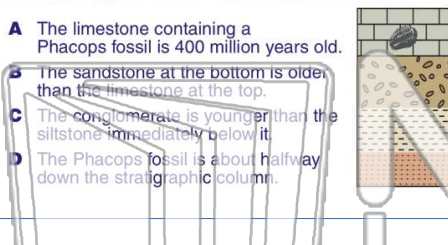
PREVIEW

Please [Sign In](#) or [Sign Up](#) to download the printable version of this worksheet

7

determine which is an example of **absolute time**.

- A The limestone containing a Phacops fossil is 400 million years old.
- B The sandstone at the bottom is older than the limestone at the top.
- C The conglomerate is younger than the siltstone immediately below it.
- D The Phacops fossil is about halfway down the stratigraphic column.



rocks through time, from the oldest to the youngest, and is **found on the west coast of England**.

True or false?

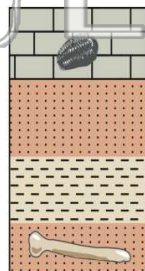
- A true
- B false



9

In this rock sequence, a reptile fossil is **below** the trilobite fossil **even though reptiles, such as dinosaurs, are younger** than trilobites. Is it a **reasonable** geological explanation to **infer** that this rock sequence has been turned upside down by **dramatic forces** such as an earthquake or some manmade disturbance?

- A yes
- B no



10

Absolute dating of rocks _____

- A determines the number of years a rock has existed
- B determines the relative age of one rock compared to another
- C uses fossils to approximate the ages of rock layers in a sequence
- D compares the fossils present in different rocks to determine which is older

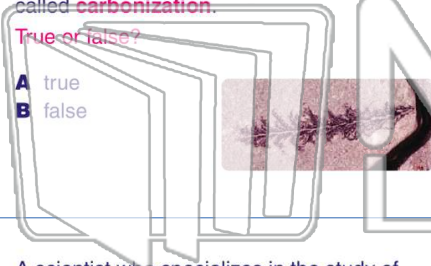


Name _____ Class _____ Date _____

1 When **leaves** are preserved in the rock record, they are usually preserved as a very thin film of black carbon. This process is called **carbonization**.

True or false?

- A true
- B false



2 Fossils of organisms that lived in a very **specific time period** for a relatively short period of time are called **index fossils**. **How do paleontologists use index fossils?**

- A make a mold to identify fossils of the same shape
- B follow a trail of footprints to lead to complete skeletons in the rock
- C estimate the date when that fossil and surrounding rock were formed
- D identify what that animal may have eaten

3 A scientist who specializes in the study of **fossils, ancient life, and ancient environments** is called a(n) _____.

4 A paleontologist has discovered fossils **on top of a mountain**. The fossils include trilobites, crinoids, brachiopods, and bivalves (like clams). This fossil assemblage reveals that the ocean



PREVIEW

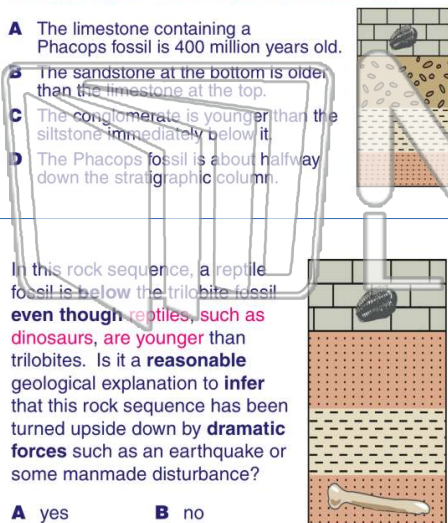
Please [Sign In](#) or [Sign Up](#) to download the printable version of this worksheet

5

7

determine which is an example of **absolute time**.

- A The limestone containing a Phacops fossil is 400 million years old.
- B The sandstone at the bottom is older than the limestone at the top.
- C The conglomerate is younger than the siltstone immediately below it.
- D The Phacops fossil is about halfway down the stratigraphic column.



rocks through time, from the oldest to the youngest, and is **found on the west coast of England**.

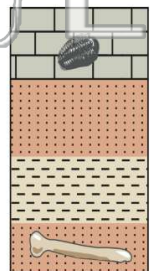
True or false?

- A true
- B false



9 In this rock sequence, a reptile fossil is below the trilobite fossil **even though reptiles, such as dinosaurs, are younger** than trilobites. Is it a **reasonable** geological explanation to **infer** that this rock sequence has been turned upside down by **dramatic forces** such as an earthquake or some manmade disturbance?

- A yes
- B no



10 **Absolute dating** of rocks _____

- A determines the number of years a rock has existed
- B determines the relative age of one rock compared to another
- C uses fossils to approximate the ages of rock layers in a sequence
- D compares the fossils present in different rocks to determine which is older