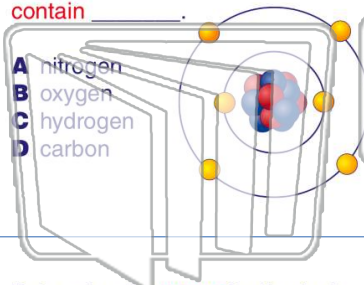




Name \_\_\_\_\_ Class \_\_\_\_\_ Date \_\_\_\_\_

- 1 The main characteristic of all **organic** compounds is that these compounds **contain** \_\_\_\_\_.

- A nitrogen
- B oxygen
- C hydrogen
- D carbon



- 2 **Diamonds** are extremely hard. The reason for this is that diamonds are made of a \_\_\_\_\_.

- A tight network of carbon atoms
- B loose network of carbon atoms
- C tight network of oxygen atoms
- D loose network of hydrogen atoms



- 3 Determine the **name** for the fuel shown below.



- 4 The diagram below is the structural formula for **octane**. This substance is an **important ingredient** in \_\_\_\_\_.

## PREVIEW

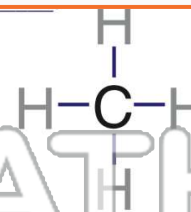
Please [Sign In](#) or [Sign Up](#) to download the printable version of this worksheet

- 7 \_\_\_\_\_ **of oxygen**, such as in the digestive system of a cow. The chemical formula for methane is \_\_\_\_\_.

- A CH<sub>4</sub>
- B SO<sub>2</sub>
- C H<sub>2</sub>O
- D CO

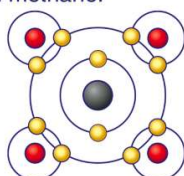


- A octane
- B butane
- C propane
- D methane



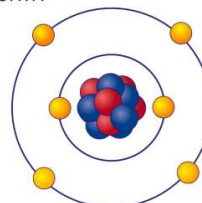
- 9 Use the diagram below to determine the **number of bonds** between carbon and hydrogen in methane.

- A 2
- B 4
- C 8
- D 15



- 10 Which type of **chemical bond** is carbon most likely to form?

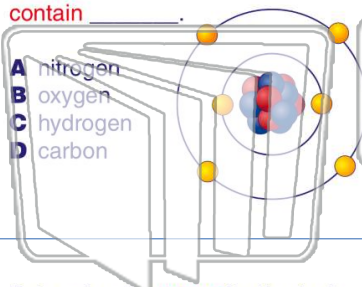
- A ionic
- B metallic
- C covalent
- D molecular






Name \_\_\_\_\_ Class \_\_\_\_\_ Date \_\_\_\_\_

- 1 The main characteristic of all **organic** compounds is that these compounds **contain** \_\_\_\_\_.



- 2 **Diamonds** are extremely hard. The reason for this is that diamonds are made of a \_\_\_\_\_.

- A tight network of carbon atoms  
B loose network of carbon atoms  
C tight network of oxygen atoms  
D loose network of hydrogen atoms



- 3 Determine the **name** for the fuel shown below.



- 4 The diagram below is the structural formula for **octane**. This substance is an **important ingredient** in \_\_\_\_\_.

**PREVIEW**

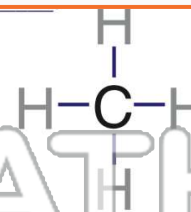
Please [Sign In](#) or [Sign Up](#) to download the printable version of this worksheet

- 7 **of oxygen**, such as in the digestive system of a cow. The chemical formula for methane is \_\_\_\_\_.

- A CH<sub>4</sub>  
B SO<sub>2</sub>  
C H<sub>2</sub>O  
D CO

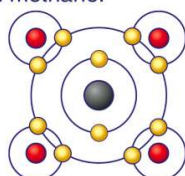


- A octane  
B butane  
C propane  
D methane



- 9 Use the diagram below to determine the **number of bonds** between carbon and hydrogen in methane.

- A 2  
B 4  
C 8  
D 15



- 10 Which type of **chemical bond** is carbon most likely to form?

- A ionic  
B metallic  
C covalent  
D molecular

