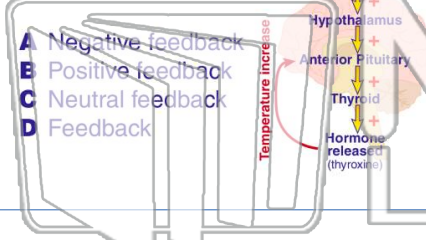




Name _____ Class _____ Date _____

1 _____ is a system used by the endocrine system to **control the levels of hormones** in the blood.



- A Negative feedback
- B Positive feedback
- C Neutral feedback
- D Feedback

2 The **male reproductive system** is specialized to produce the **estrogen** hormone and **egg cells**.

- A true
- B false

3 Which structure(s) of the male reproductive system produces **testosterone**?

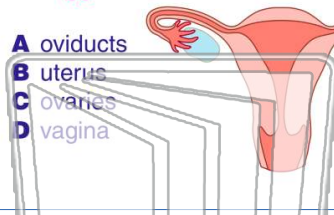
4 What are **two** structures of a **sperm cell**?



PREVIEW

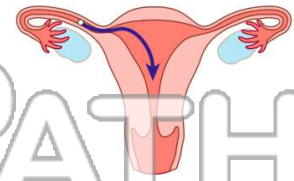
Please [Sign In](#) or [Sign Up](#) to download the printable version of this worksheet

7 _____ produces _____ the **egg cells**?



- A oviducts
- B uterus
- C ovaries
- D vagina

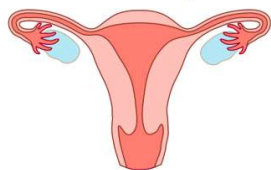
8 _____ through what structure?



- A oviducts
- B uterus
- C ovaries
- D vagina

9 The _____ is a **muscular organ** of the female reproductive system that leads to the outside of the body.

- A oviducts
- B uterus
- C ovaries
- D vagina



10 The **menstrual cycle** starts when the _____.

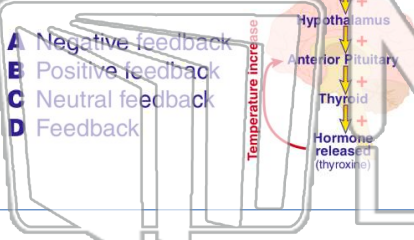
- A uterin walls thicken
- B egg is released from the ovaries
- C egg is fertilized
- D egg begins to mature in the ovaries





Name _____ Class _____ Date _____

1 _____ is a system used by the endocrine system to **control the levels of hormones** in the blood.



- A Negative feedback
- B Positive feedback
- C Neutral feedback
- D Feedback

2 The **male reproductive system** is specialized to produce the **estrogen** hormone and **egg cells**.

- A true
- B false

3 Which structure(s) of the male reproductive system produces **testosterone**?

4 What are **two** structures of a **sperm cell**?

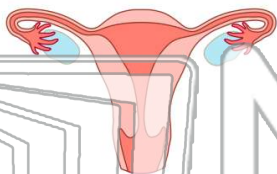


PREVIEW

Please [Sign In](#) or [Sign Up](#) to download the printable version of this worksheet

7 The **female reproductive system** produces the **egg cells**?

- A oviducts
- B uterus
- C ovaries
- D vagina



8 The **ovaries** through what structure?

- A oviducts
- B uterus
- C ovaries
- D vagina



9 The _____ is a **muscular organ** of the female reproductive system that leads to the outside of the body.

- A oviducts
- B uterus
- C ovaries
- D vagina



10 The **menstrual cycle** starts when the _____.

- A uterin walls thicken
- B egg is released from the ovaries
- C egg is fertilized
- D egg begins to mature in the ovaries

