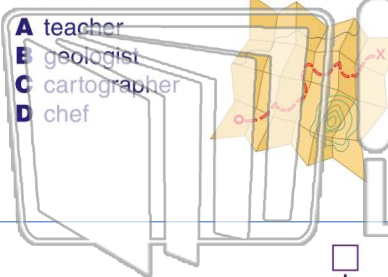




Name _____ Class _____ Date _____

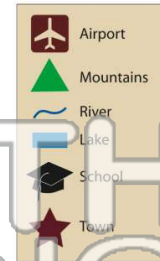
1 Another name for a **person who designs maps** is a _____.

- A teacher
- B geologist
- C cartographer
- D chef



2 What is the name of this **map feature**?

- A latitude
- B compass rose
- C state
- D legend



3 What are the **four cardinal directions**?



4 Which of these is **not** a type of map?

- A road map

5



PREVIEW

Please [Sign In](#) or [Sign Up](#) to download the printable version of this worksheet

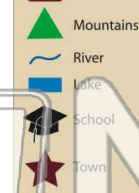
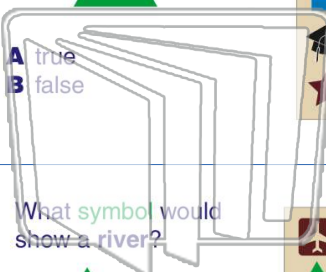
7

was marked on the map

with a



- A true
- B false







where they would be **flying from**. What **symbol** did they look for?


- A  C 
- B  D 



9

What **symbol** would show a **river**?

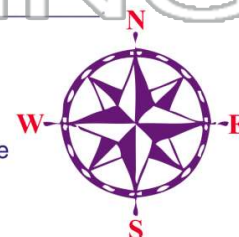
- A 
- B 
- C 
- D 



10

This is a _____

- A longitude
- B scale
- C map
- D compass rose

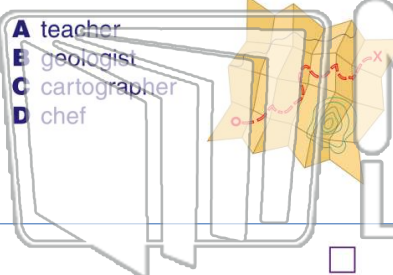




Name _____ Class _____ Date _____

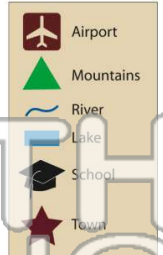
1 Another name for a **person who designs maps** is a _____.

- A teacher
- B geologist
- C cartographer
- D chef



2 What is the name of this **map feature**?

- A latitude
- B compass rose
- C state
- D legend



3 What are the **four cardinal directions**?



4 Which of these is **not** a type of map?

- A road map



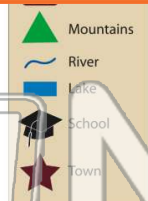
5

PREVIEW

Please [Sign In](#) or [Sign Up](#) to download the printable version of this worksheet

7 **True or False** Mountains are marked on the map with a .

- A true
- B false








8 **True or False** An airport is marked on the map where they would be flying from. What **symbol** did they look for?

- A 
- B 
- C 
- D 



9 What **symbol** would show a river?

- A 
- B 
- C 
- D 



10 This is a _____.

- A longitude
- B scale
- C map
- D compass rose

