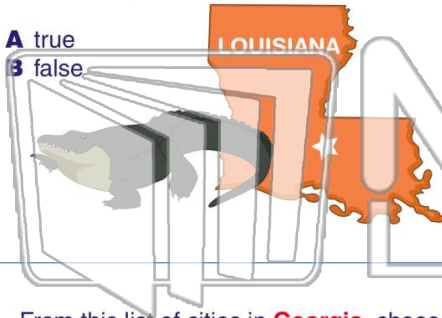




Name _____ Class _____ Date _____

1 **Baton Rouge** is the capital of **Louisiana**.

- A true
- B false



2 If you wanted to visit the state capital building in **Minnesota**, where would you go?

- A Blaine
- B Erskine
- C Granite Falls
- D Saint Paul



3 From this list of cities in **Georgia**, choose the capital.

4 Which of these U.S. cities is **not** a capital?



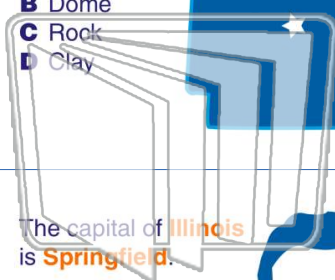
PREVIEW

Please [Sign In](#) or [Sign Up](#) to download the printable version of this worksheet

7

- A Bird
- B Dome
- C Rock
- D Clay

ARKANSAS



- A Pierre
- B Saint Paul
- C Hartford
- D Baton Rouge

CONNECTICUT



9 The capital of **Illinois** is **Springfield**.

- A true
- B false



10 What is the capital of **Colorado**?

- A Dover
- B Jefferson City
- C Denver
- D Saint Paul

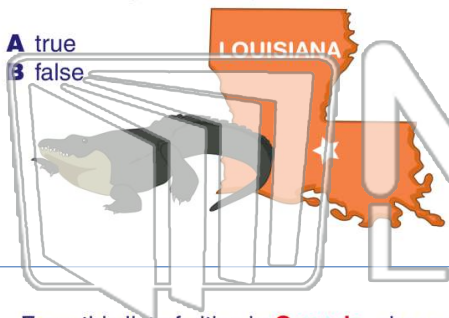




Name _____ Class _____ Date _____

1 Baton Rouge is the capital of Louisiana.

- A true
- B false



2 If you wanted to visit the state capital building in Minnesota, where would you go?

- A Blaine
- B Erskine
- C Granite Falls
- D Saint Paul



3 From this list of cities in Georgia, choose the capital.

4 Which of these U.S. cities is **not** a capital?

PREVIEW

Please [Sign In](#) or [Sign Up](#) to download the printable version of this worksheet

7

- A Bird
- B Dome
- C Rock
- D Clay



- A Pierre
- B Saint Paul
- C Hartford
- D Baton Rouge



9 The capital of Illinois is Springfield.

- A true
- B false



10 What is the capital of Colorado?

- A Dover
- B Jefferson City
- C Denver
- D Saint Paul

