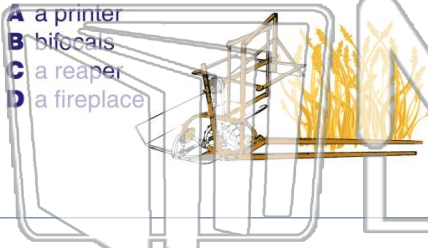




Name _____ Class _____ Date _____

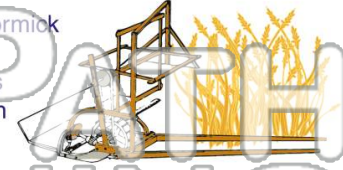
1 A **machine** for harvesting grain is called _____.

- A a printer
- B bifocals
- C a reaper
- D a fireplace



2 Robert and Cyrus _____ invented the **reaper**.

- A McCormick
- B Reap
- C Jones
- D Brown



3 The **buying and selling** of products is called _____.



4 The **available amount** of a product is called the _____.

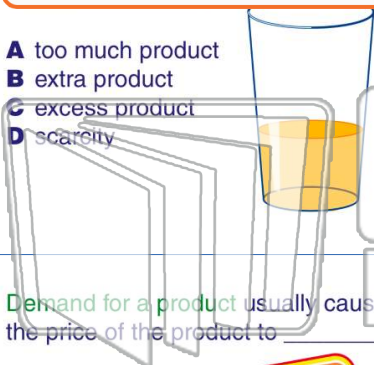


PREVIEW

Please [Sign In](#) or [Sign Up](#) to download the printable version of this worksheet

7 _____ for a product.

- A too much product
- B extra product
- C excess product
- D scarcity



- A demand
- B no need
- C no want
- D none



9 Demand for a product usually causes the price of the product to _____.

- A decrease
- B stay the same
- C rise
- D go down



10 The way in which a nation provides for the wants and needs of its people is called the _____.

- A circus
- B economy
- C playground
- D chorus

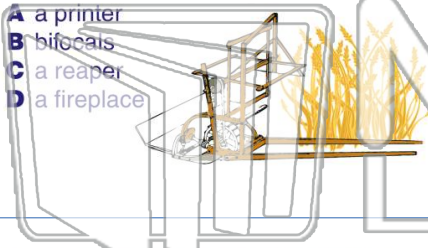




Name _____ Class _____ Date _____

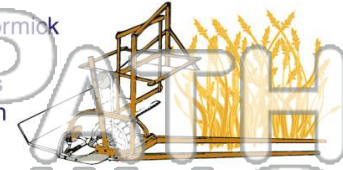
1 A **machine** for harvesting grain is called _____.

- A a printer
- B bifocals
- C a reaper
- D a fireplace



2 Robert and Cyrus _____ invented the **reaper**.

- A McCormick
- B Reap
- C Jones
- D Brown



3 The **buying and selling** of products is called _____.



4 The **available amount** of a product is called the _____.

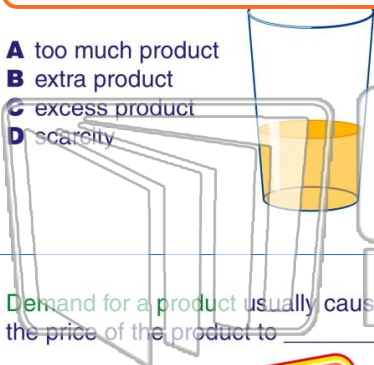


PREVIEW

Please [Sign In](#) or [Sign Up](#) to download the printable version of this worksheet

7 _____ for a product.

- A too much product
- B extra product
- C excess product
- D scarcity



- A demand
- B no need
- C no want
- D none



9 **Demand** for a product usually causes the price of the product to _____.

- A decrease
- B stay the same
- C rise
- D go down



10 The way in which a nation provides for the wants and needs of its people is called the _____.

- A circus
- B economy
- C playground
- D chorus

