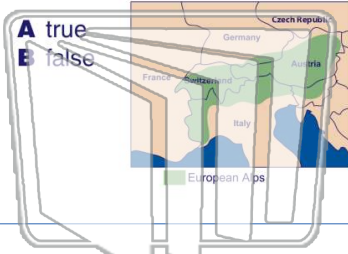




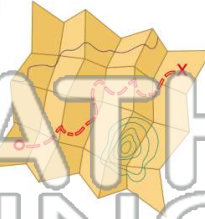
Name \_\_\_\_\_ Class \_\_\_\_\_ Date \_\_\_\_\_

1 A drawing of what a particular place looks like from above is called a **map**.



2 A **mapmaker** is known as a **cartographer**.

A true  
B false



3 **Cartographers** use \_\_\_\_\_ on a map to stand for real objects.



4 A **model** of the Earth in the shape of a sphere is called a \_\_\_\_\_.

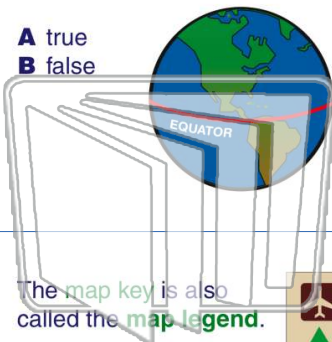


## PREVIEW

Please [Sign In](#) or [Sign Up](#) to download the printable version of this worksheet

7 \_\_\_\_\_

A true  
B false



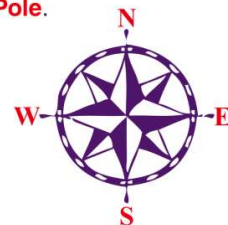
A keg  
B lock  
C key  
D knot

9 The **map key** is also called the **map legend**.

A true  
B false

10 The **northernmost** point on the Earth is the **North Pole**.

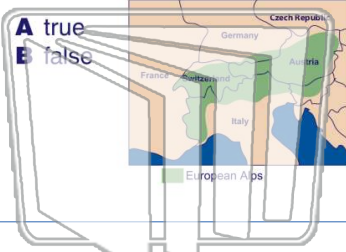
A true  
B false





Name \_\_\_\_\_ Class \_\_\_\_\_ Date \_\_\_\_\_

1 A drawing of what a particular place looks like from above is called a **map**.



2 A **mapmaker** is known as a **cartographer**.

A true  
B false



3 **Cartographers** use \_\_\_\_\_ on a map to stand for real objects.



4 A **model** of the Earth in the shape of a sphere is called a \_\_\_\_\_.

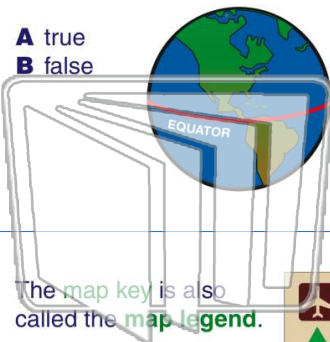


## PREVIEW

Please [Sign In](#) or [Sign Up](#) to download the printable version of this worksheet

7 \_\_\_\_\_

A true  
B false



9 The **map key** is also called the **map legend**.

A true  
B false



A key  
B look  
C key  
D knot

10 The **northernmost** point on the Earth is the **North Pole**.

A true  
B false

