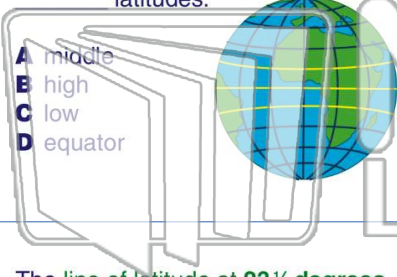




Name \_\_\_\_\_ Class \_\_\_\_\_ Date \_\_\_\_\_

1 The lines of latitude **between** the low and high latitudes are called the latitudes.

- A middle
- B high
- C low
- D equator



2 The line of latitude at **23½ degrees north** is called the \_\_\_\_\_.

- A Tropic of Cancer
- B Prime Meridian
- C Tropic of Capricorn
- D equator

3 The line of latitude at **23½ degrees south** is called the \_\_\_\_\_.

4 The lines on a map or globe that **stretch north and south** and measure **distance from the Prime Meridian** are lines of




## PREVIEW

Please [Sign In](#) or [Sign Up](#) to download the printable version of this worksheet

7 The **Prime Meridian at 180 degrees**. The dates change as a person travels east or west across this line.

- A true
- B false



This type of map also shows the height, or elevation, of the land and is known as a **relief map**.

- A climate zone map
- B product map
- C physical map
- D resources map



9 A map that **shows the borders of countries or states** is a \_\_\_\_\_. This type of map also shows **capital cities**.

- A product map
- B political map
- C resources map
- D climate zone map



10 A map that shows the **climate in different areas** of the world is a \_\_\_\_\_.

- A product map
- B political map
- C resources map
- D climate zone map

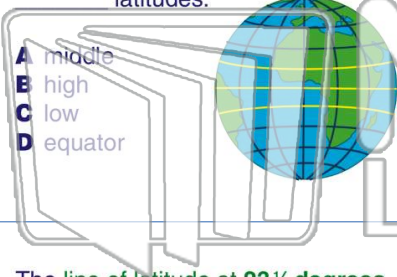




Name \_\_\_\_\_ Class \_\_\_\_\_ Date \_\_\_\_\_

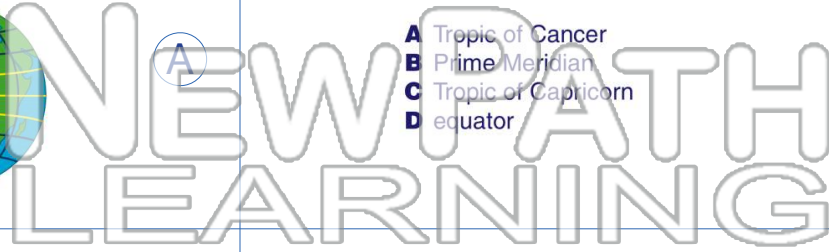
1 The lines of latitude **between the low and high latitudes** are called the latitudes.

- A middle
- B high
- C low
- D equator



2 The **line of latitude at 23½ degrees north** is called the \_\_\_\_\_.

- A Tropic of Cancer
- B Prime Meridian
- C Tropic of Capricorn
- D equator



3 The **line of latitude at 23½ degrees south** is called the \_\_\_\_\_.

4 The lines on a map or globe that **stretch north and south** and measure **distance from the Prime Meridian** are lines of




5

**PREVIEW**

Please [Sign In](#) or [Sign Up](#) to download the printable version of this worksheet

7 **Meridian at 180 degrees.** The dates change as a person travels east or west across this line.

- A true
- B false



This type of map also shows the height, or elevation, of the land and is known as a **relief map**.

- A climate zone map
- B product map
- C physical map
- D resources map



9 A map that **shows the borders of countries or states** is a \_\_\_\_\_. This type of map also shows **capital cities**.

- A product map
- B political map
- C resources map
- D climate zone map



10 A map that shows the **climate in different areas of the world** is a \_\_\_\_\_.

- A product map
- B political map
- C resources map
- D climate zone map

