




Name _____ Class _____ Date _____

1 The Great Lakes and the St. Lawrence River form a **waterway** known as the _____.

- A St. Lawrence Seaway
- B Nile River
- C Amazon River
- D Mississippi River



2 Three large rivers in the **Middle Western Region** are the Ohio River, the Missouri River and the _____.

- A Genesee River
- B Mississippi River
- C Columbia River
- D Colorado River



3 A rapidly moving and destructive windstorm is known as a **tornado**.



4 The man born in **Kentucky** who was **President** during the Civil War was _____.



5

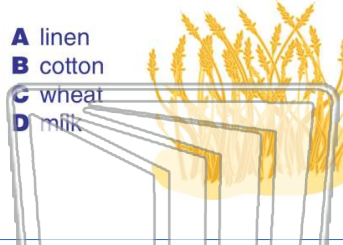


PREVIEW

Please [Sign In](#) or [Sign Up](#) to download the printable version of this worksheet

7

- A linen
- B cotton
- C wheat
- D milk



- A Kansas
- B Washington
- C Alabama
- D Vermont



9 The tallest building in the U.S. is the _____ . It is located in **Chicago, Illinois**.

- A Empire Sate Building
- B CN Tower
- C Petronas Tower
- D Sears Tower



10 Nebraska is nicknamed the "**Cornhusker State**."

- A true
- B false






Name _____ Class _____ Date _____

1 The Great Lakes and the St. Lawrence River form a **waterway** known as the _____.

- A St. Lawrence Seaway
- B Nile River
- C Amazon River
- D Mississippi River



2 **Three large rivers** in the **Middle Western Region** are the Ohio River, the Missouri River and the _____.

- A Genesee River
- B Mississippi River
- C Columbia River
- D Colorado River



3 A rapidly moving and destructive windstorm is known as a **tornado**.



4 The man born in Kentucky who was **President** during the Civil War was _____.






PREVIEW

Please [Sign In](#) or [Sign Up](#) to download the printable version of this worksheet

7

- A linen
- B cotton
- C wheat
- D milk



- A Kansas
- B Washington
- C Alabama
- D Vermont



9 The tallest building in the U.S. is the _____ . It is located in Chicago, Illinois.

- A Empire Sate Building
- B CN Tower
- C Petronas Tower
- D Sears Tower



10 Nebraska is nicknamed the "Cornhusker State."

- A true
- B false

