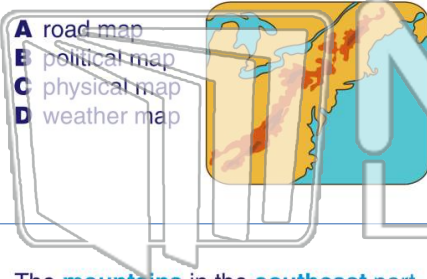




Name _____ Class _____ Date _____

1 The **type of map** that shows **geographic features** is a _____.

- A road map
- B political map
- C physical map
- D weather map



2 The **mountains** in the **northeast** part of New York State are the _____.

- A Adirondack Mountains
- B Andes Mountains
- C Rocky Mountains
- D Ural Mountains



3 The **mountains** in the **southeast** part of New York State are the _____.

4 A **Great Lake** on the **west** side of New York State is _____.

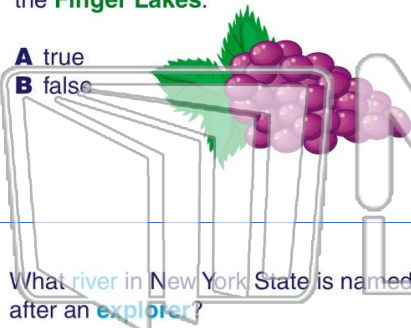


PREVIEW

Please [Sign In](#) or [Sign Up](#) to download the printable version of this worksheet

7 The **maples** and **gingers** are called the **Finger Lakes**.

- A true
- B false



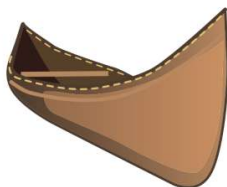
8 The **Sioux** and **Cherokee** are called the **Five Civilized Tribes**.

- A Sioux River
- B Seminole River
- C Mohawk River
- D Cherokee River



9 What **river** in New York State is named after an **explorer**?

- A Delaware River
- B Hudson River
- C East River
- D Mohawk River



10 The **river** in **western New York State** which forms **part of the border** between New York and Canada is the _____.

- A Niagara River
- B Mississippi River
- C Amazon River
- D Colorado River

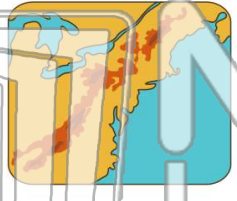




Name _____ Class _____ Date _____

1 The **type of map** that shows **geographic features** is a _____.

- A road map
- B political map
- C physical map
- D weather map



2 The **mountains** in the **northeast** part of New York State are the _____.

- A Adirondack Mountains
- B Andes Mountains
- C Rocky Mountains
- D Ural Mountains



3 The **mountains** in the **southeast** part of New York State are the _____.

4 A **Great Lake** on the **west** side of New York State is _____.

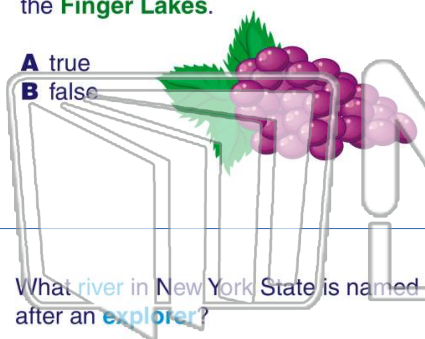


PREVIEW

Please [Sign In](#) or [Sign Up](#) to download the printable version of this worksheet

7 The **maples** and **gingers** are called the **Finger Lakes**.

- A true
- B false



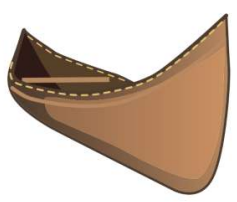
8 The **Sioux** and **Cherokee** lived in _____.

- A Sioux River
- B Seminole River
- C Mohawk River
- D Cherokee River



9 What **river** in New York State is named after an **explorer**?

- A Delaware River
- B Hudson River
- C East River
- D Mohawk River



10 The **river** in **western New York State** which forms **part of the border** between New York and Canada is the _____.

- A Niagara River
- B Mississippi River
- C Amazon River
- D Colorado River

