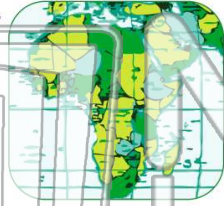




Name _____ Class _____ Date _____

1 The **type of map** that shows **countries, states, cities,** and the **borders** between them is a _____.

- A physical map
- B road map
- C political map
- D relief map



2 The name of **our state** is _____.

- A Delaware
- B New York State
- C North Carolina
- D Ohio



3 **New York State** is located in the **northeastern** part of the United States.

4 Which **country** shares a border with New York State?



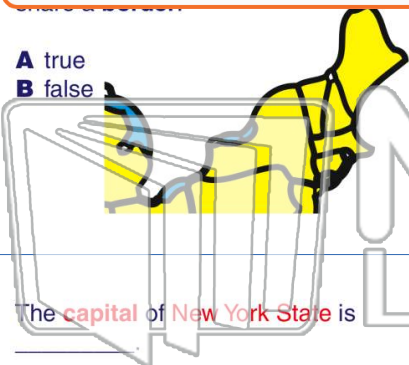

PREVIEW

Please [Sign In](#) or [Sign Up](#) to download the printable version of this worksheet

5

7

- A true
- B false



- A South Carolina
- B Connecticut
- C Georgia
- D California



9 The **capital** of **New York State** is _____.

- A Washington, D.C.
- B New York City
- C Albany
- D Rochester

10 The **city** of _____ is on **Lake Ontario**.

- A New York
- B Washington, D.C.
- C Orlando
- D Rochester





Name _____ Class _____ Date _____

1 The **type of map** that shows **countries, states, cities,** and the **borders** between them is a _____.

- A physical map
- B road map
- C political map
- D relief map



2 The name of **our state** is _____.

- A Delaware
- B New York State
- C North Carolina
- D Ohio



3 **New York State** is located in the **northeastern** part of the United States.

4 Which **country** shares a border with New York State?

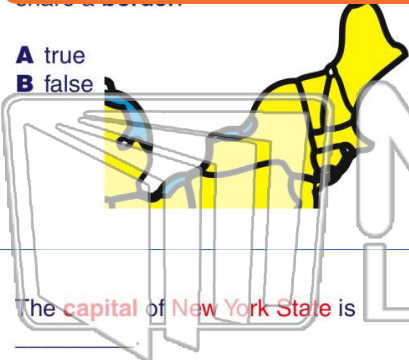


PREVIEW

Please [Sign In](#) or [Sign Up](#) to download the printable version of this worksheet

7 **Canada** is a **continent**.

- A true
- B false



- A South Carolina
- B Connecticut
- C Georgia
- D California



9 The **capital** of **New York State** is _____.

- A Washington, D.C.
- B New York City
- C Albany
- D Rochester

10 The **city** of _____ is on **Lake Ontario**.

- A New York
- B Washington, D.C.
- C Orlando
- D Rochester

