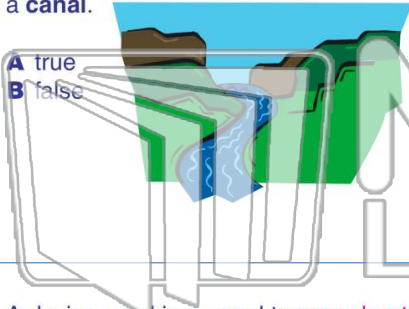




Name _____ Class _____ Date _____

1 A waterway built by humans is called a canal.

- A true
- B false



2 The canal that opened in 1825 in New York State was the _____.

- A Panama Canal
- B Erie Canal
- C Suez Canal
- D Welland Canal



3 A device used in a canal to move boats up and down levels, sometimes called a water elevator, is known as a _____.

4 Which city in New York State became the largest city in the United States because of the increased traffic from the Erie Canal?



PREVIEW


Please [Sign In](#) or [Sign Up](#) to download the printable version of this worksheet

7 the _____.

- A Santa Fe Trail
- B Mormon Trail
- C National Road
- D California Trail



- A railroads
- B steamboats
- C stagecoaches
- D trains



9 The mail system where young men on horseback delivered the mail was called the _____.

- A Pony Express
- B Horse Express
- C Mare Express
- D Deer Express



10 How long did it take a Pony Express rider to travel 2,000 miles?

- A 8 days
- B 8 weeks
- C 8 months
- D 8 years

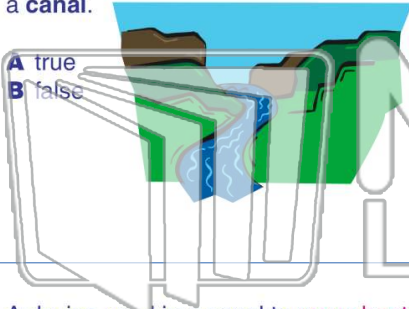




Name _____ Class _____ Date _____

1 A waterway built by humans is called a canal.

- A true
- B false



2 The canal that opened in 1825 in New York State was the _____.

- A Panama Canal
- B Erie Canal
- C Suez Canal
- D Welland Canal



3 A device used in a canal to move boats up and down levels, sometimes called a water elevator, is known as a _____.

4 Which city in New York State became the largest city in the United States because of the increased traffic from the Erie Canal?



PREVIEW

Please [Sign In](#) or [Sign Up](#) to download the printable version of this worksheet

7 the _____.

- A Santa Fe Trail
- B Mormon Trail
- C National Road
- D California Trail



- A railroads
- B steamboats
- C stagecoaches
- D trains



9 The mail system where young men on horseback delivered the mail was called the _____.

- A Pony Express
- B Horse Express
- C Mare Express
- D Deer Express



10 How long did it take a Pony Express rider to travel 2,000 miles?

- A 8 days
- B 8 weeks
- C 8 months
- D 8 years

