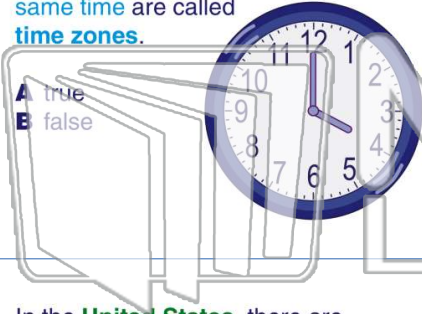




Name _____ Class _____ Date _____

1 Regions of the earth that observe the same time are called **time zones**.

A true
B false



2 There are _____ **time zones** in the world.

A 2
B 12
C 24
D 48



3 In the **United States**, there are _____ **time zones**.

4 Each time zone is _____ **apart** from the time zone next to it.



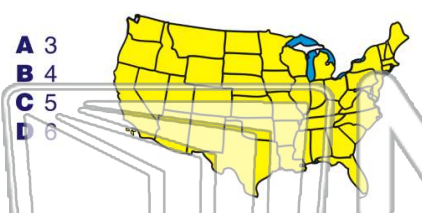
5

PREVIEW

Please [Sign In](#) or [Sign Up](#) to download the printable version of this worksheet

7

A 3
B 4
C 5
D 6



8

A the Prime Meridian
B Daylight Savings Time
C the Tropic of Cancer
D the Tropic of Capricorn



9 An **object** like a **tool** or **piece of pottery** left by people who lived in the past is called an _____.

A artist
B artifact
C artery
D argument



10 An **arrowhead** is an example of an **artifact**.

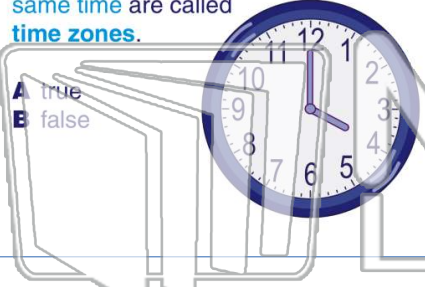
A true
B false





Name _____ Class _____ Date _____

1 Regions of the earth that observe the same time are called **time zones**.



- A true
- B false

2 There are _____ **time zones** in the world.



- A 2
- B 12
- C 24
- D 48

3 In the **United States**, there are _____ **time zones**.

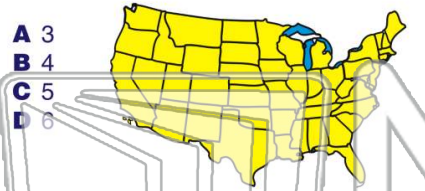


4 Each time zone is _____ **apart** from the time zone next to it.

PREVIEW

Please [Sign In](#) or [Sign Up](#) to download the printable version of this worksheet

5



- A 3
- B 4
- C 5
- D 6

6 Moving from east to west, the _____ is called _____.



- A the Prime Meridian
- B Daylight Savings Time
- C the Tropic of Cancer
- D the Tropic of Capricorn

9 An **object** like a **tool** or **piece of pottery** left by people who lived in the past is called an _____.



- A artist
- B artifact
- C artery
- D argument

10 An **arrowhead** is an example of an **artifact**.



- A true
- B false