



Name \_\_\_\_\_ Class \_\_\_\_\_ Date \_\_\_\_\_

1

New York State Government 			
	Executive	Legislative	Judicial
Local	Mayor	City Council	13.
State	14.	Legislature	15.
National	16.	17.	Supreme Court

The answer to 15 is \_\_\_\_\_.

- A Judges
- B Governor
- C President
- D Congress

2



The Revolutionary War began in 1765.

- A true
- B false

3



4



5



## PREVIEW

Please [Sign In](#) or [Sign Up](#) to download the printable version of this worksheet

7

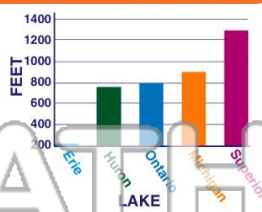
What symbol stands for a city?

- Mountains
- National Capital - Washington, D.C.
- State Capital - Albany
- City

- A mountain peaks
- B star in a circle
- C star
- D circle

lake on the graph is Lake Ontario.

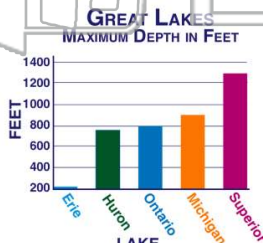
- A true
- B false



9

The shallowest lake on the graph is Lake Erie.

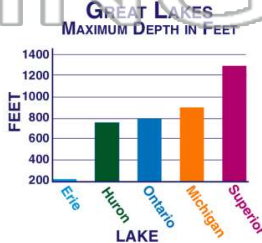
- A true
- B false



10

According to the graph, there are five Great Lakes.

- A true
- B false





Name \_\_\_\_\_ Class \_\_\_\_\_ Date \_\_\_\_\_

1

New York State Government 			
	Executive	Legislative	Judicial
Local	Mayor	City Council	13.
State	14.	Legislature	15.
National	16.	17.	Supreme Court

The answer to 15 is \_\_\_\_\_.

**A** Judges                      **C** President  
**B** Governor                    **D** Congress

2



The Revolutionary War began in 1765.

**A** true  
**B** false

3



4






## PREVIEW

Please [Sign In](#) or [Sign Up](#) to download the printable version of this worksheet

5

7

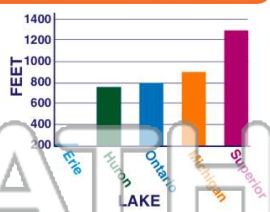
What symbol stands for a city?

-  Mountains
-  National Capital - Washington, D.C.
-  State Capital - Albany
-  City

**A** mountain peaks                      **C** star  
**B** star in a circle                        **D** circle

lake on the graph is Lake Ontario.

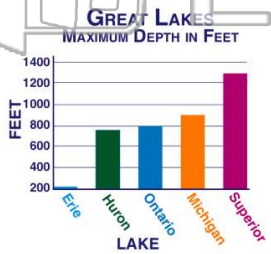
**A** true  
**B** false



9

The shallowest lake on the graph is Lake Erie.

**A** true  
**B** false



10

According to the graph, there are five Great Lakes.

**A** true  
**B** false

