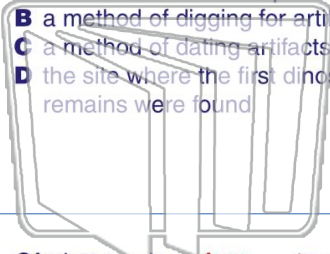




Name _____ Class _____ Date _____

1 What is **carbon-14**?

A the nickname for Pompeii
 B a method of digging for artifacts
 C a method of dating artifacts
 D the site where the first dinosaur remains were found



2 A piece of **pottery with writing on it** is called a(n) _____.

A slab
 B obelisk
 C ibis
 D ostrakon



3 Of what use is a **sieve** to an archaeologist?

A to clean dinosaur bones



4 What is a **mummy**?

A a statue found in a tomb

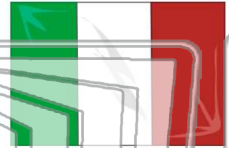


PREVIEW

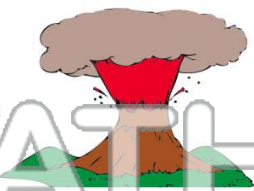
Please [Sign In](#) or [Sign Up](#) to download the printable version of this worksheet

7 Where is **Pompeii** located?

A China
 B Italy
 C Spain
 D France

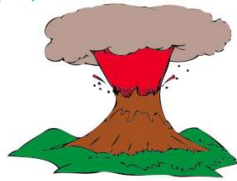


A 1997
 B 1780
 C 20 B.C.
 D 79



9 What was the name of the volcano that **erupted on Pompeii**?

A Mt. Rome
 B Mt. Everest
 C Mt. Vesuvius
 D Mt. St. Helens



10 Archaeologists only study the time period **between the year 1 A.D. and the present.**

A true
 B false





Name _____ Class _____ Date _____

1

What is **carbon-14**?

- A the nickname for Pompeii
- B a method of digging for artifacts
- C a method of dating artifacts
- D the site where the first dinosaur remains were found



2

A piece of **pottery with writing on it** is called a(n) _____.

- A slab
- B obelisk
- C ibis
- D ostrakon



D

3

Of what use is a **sieve** to an archaeologist?



A to clean dinosaur bones

4

What is a **mummy**?

- A a statue found in a tomb



C

5



PREVIEW

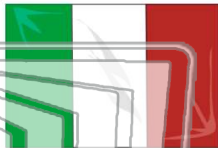
Please [Sign In](#) or [Sign Up](#) to download the printable version of this worksheet

C

7

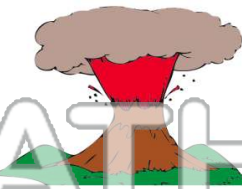
Where is Pompeii located?

- A China
- B Italy
- C Spain
- D France



B

- A 1997
- B 1780
- C 20 B.C.
- D 79




D

9

What was the name of the volcano that **erupted on Pompeii**?

- A Mt. Rome
- B Mt. Everest
- C Mt. Vesuvius
- D Mt. St. Helens



C

10

Archaeologists only study the time period **between the year 1 A.D. and the present.**

- A true
- B false



B