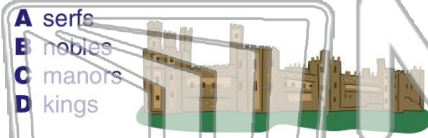




Name _____ Class _____ Date _____

1 Who was at the **bottom** of the class system in the **Middle Ages**?

- A serfs
- B nobles
- C manors
- D kings



2 During the Middle Ages, the **nobles** were given land by the king in **exchange for** _____.

- A money
- B slaves
- C military service
- D goods



3 During the Middle Ages, the **peasants** worked on a **manor** and paid **rent** to the nobles.

4 The **largest social class** in **Aztec** society was made up of _____.

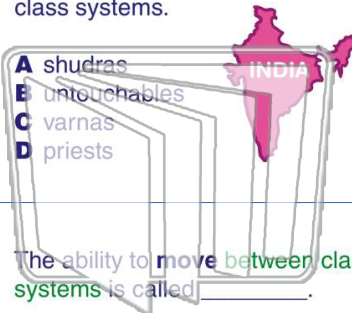


PREVIEW

Please [Sign In](#) or [Sign Up](#) to download the printable version of this worksheet

7 _____ separated from the rest of the class systems.

- A shudras
- B untouchables
- C varnas
- D priests



- A true
- B false



9 The ability to **move between class systems** is called _____.

- A exploitation
- B social mobility
- C social strata
- D prestige

10 The **class separation** based on **race** in Africa is known as _____.

- A casting
- B apartheid
- C social pyramid
- D redlining





Name _____ Class _____ Date _____

1 Who was at the **bottom** of the class system in the **Middle Ages**?



2 During the Middle Ages, the **nobles** were given land by the king in **exchange for** _____.

- A money
- B slaves
- C military service
- D goods



3 During the Middle Ages, the **peasants** worked on a **manor** and paid **rent** to the nobles.

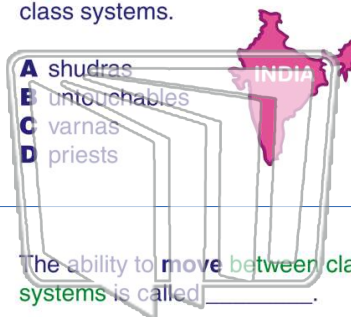
4 The **largest social class** in **Aztec** society was made up of _____.



PREVIEW

Please [Sign In](#) or [Sign Up](#) to download the printable version of this worksheet

7 _____ separated from the rest of the class systems.



- A true
- B false



9 The ability to **move between class systems** is called _____.

- A exploitation
- B social mobility
- C social strata
- D prestige

10 The **class separation** based on **race** in Africa is known as _____.

- A casting
- B apartheid
- C social pyramid
- D redlining

