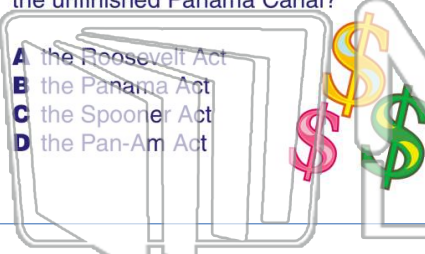




Name _____ Class _____ Date _____


1 Which **act** allowed the US to spend **\$40 million** on the attempt to purchase the unfinished Panama Canal?

A the Roosevelt Act
B the Panama Act
C the Spooner Act
D the Pan-Am Act



2 The **Panama Canal Zone** was controlled **by which country** from 1903 to 1979?

A Panama
B Columbia
C United States
D France



3 Dr. William Gorgas led the battle to rid Panama of **this insect** that carried **yellow fever**.

4 Roosevelt **did not help Panama** during the **revolt from Columbia**.

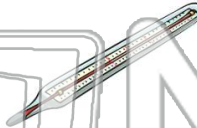



PREVIEW


Please [Sign In](#) or [Sign Up](#) to download the printable version of this worksheet

7 **_____** Panama Canal?

A meningitis
B tuberculosis
C yellow fever
D hepatitis




8 **_____** Ferdinand de Lesseps
B Theodore Roosevelt
C John Stevens
D Philippe Bunau-Varilla




9 About how many **workers died** during the **American** construction of the Panama Canal?

A 5,500
B 15,500
C 500
D 25,000



10 What structures act like "**water elevators**" to **raise and lower ships** in the canal?

A aqueducts
B locks
C obelisks
D towers

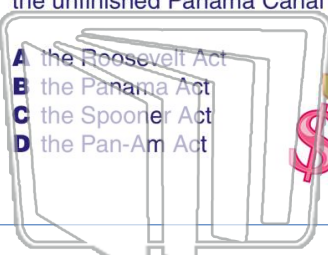




Name _____ Class _____ Date _____

1 Which **act** allowed the US to spend **\$40 million** on the attempt to purchase the unfinished Panama Canal?

A the Roosevelt Act
B the Panama Act
C the Spooner Act
D the Pan-Am Act



2 The **Panama Canal Zone** was controlled **by which country** from 1903 to 1979?

A Panama
B Columbia
C United States
D France



3 Dr. William Gorgas led the battle to rid Panama of **this insect** that carried **yellow fever**.

4 Roosevelt **did not help Panama** during the **revolt from Columbia**.

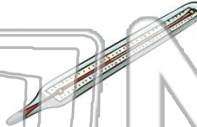



PREVIEW

Please [Sign In](#) or [Sign Up](#) to download the printable version of this worksheet

7 **_____** Panama Canal?

A meningitis
B tuberculosis
C yellow fever
D hepatitis




8 **_____** Ferdinand de Lesseps
B Theodore Roosevelt
C John Stevens
D Philippe Bunau-Varilla



9 About how many **workers died** during the **American** construction of the Panama Canal?

A 5,500
B 15,500
C 500
D 25,000



10 What structures act like "**water elevators**" to **raise and lower ships** in the canal?

A aqueducts
B locks
C obelisks
D towers

