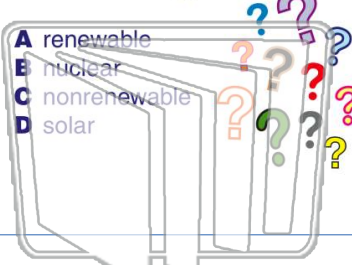




Name _____ Class _____ Date _____

1 We get **most of our energy** from _____ energy.

- A renewable
- B nuclear
- C nonrenewable
- D solar



2 **Solar energy comes from _____.**

- A the moon
- B the sun
- C Venus
- D Mars



NEW PATH LEARNING

3 Which of the following takes up the **most energy**?

A computer



4 The US uses what form of renewable energy the **most**?





PREVIEW

Please [Sign In](#) or [Sign Up](#) to download the printable version of this worksheet

7

- A fossil fuels
- B nuclear power
- C solar power
- D hydropower



9 It usually takes **less energy** to make something from a **recycled good** than from a **new resource**.

- A true
- B false



10 **largest source of biomass energy?**

- A coal
- B wood
- C the sun
- D water



10 The **fuel** that is used by **most nuclear plants** is _____.

- A hydrogen
- B carbon-14
- C nitrogen
- D uranium-235



NEW PATH LEARNING



Name _____ Class _____ Date _____

1 We get **most of our energy** from _____ energy.

- A renewable
- B nuclear
- C nonrenewable
- D solar

2 **Solar energy comes from _____.**

- A the moon
- B the sun
- C Venus
- D Mars



3 Which of the following takes up the **most energy**?

4 The US uses what form of renewable energy the **most**?

PREVIEW

Please [Sign In](#) or [Sign Up](#) to download the printable version of this worksheet

7 **_____** is the **largest source of biomass energy?**

- A fossil fuels
- B nuclear power
- C solar power
- D hydropower

- A coal
- B wood
- C the sun
- D water



9 It usually takes **less energy** to make something from a **recycled good** than from a **new resource**.

- A true
- B false



10 The **fuel** that is used by **most nuclear plants** is _____.

- A hydrogen
- B carbon-14
- C nitrogen
- D uranium-235

