




Name _____ Class _____ Date _____

1 Which Mesopotamian empire combined **Sumer** and **Akkad**?

- A Babylonia
- B Assyria
- C Turkey
- D Ur



2 The **Tigris and Euphrates Rivers** flow directly into the **Persian Gulf**.

True or false?

- A true
- B false



NEW PATH LEARNING

3 Ancient Mesopotamians used _____ in order to **provide and control water** for the **dry land** in the area.

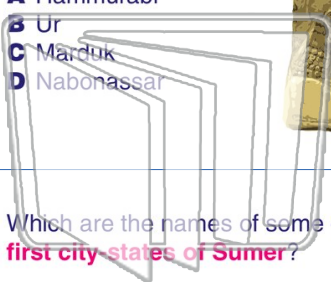
4 What was one of the **major steps** toward the **rise of civilization** in **southern Mesopotamia**?



5 **PREVIEW**
Please [Sign In](#) or [Sign Up](#) to download the printable version of this worksheet

7 **1992 B.C. and 1750 B.C.?**

- A Hammurabi
- B Ur
- C Marduk
- D Nabonassar



symbols that were marked in clay.

- A pictographic
- B alphabetic
- C numeric
- D ancient Egyptian



NEW PATH LEARNING

9 Which are the names of some of the **first city-states of Sumer**?

- A Ur, Uruk, and Umma
- B Babylonia, Nineveh, and Assyria,
- C Sargon, Hammurabi, and Nebuchadnezzar
- D Gilgamesh, Israel, and Mesopotamia

10 During the **Babylonian Dynasty**, it may have been **Nebuchadnezzar II** commissioned the **creation** of the famous _____.


- A Great Pyramid
- B Assyrian army
- C Hammurabi's Code
- D Hanging Gardens of Babylon



Name _____ Class _____ Date _____

1 Which Mesopotamian empire combined **Sumer** and **Akkad**?

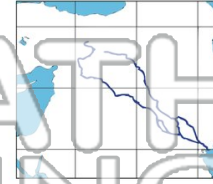
- A Babylonia
- B Assyria
- C Turkey
- D Ur



2 The **Tigris and Euphrates Rivers** flow directly into the **Persian Gulf**.

True or false?

- A true
- B false



NEW PATH LEARNING

3 Ancient Mesopotamians used _____ in order to **provide and control water** for the **dry land** in the area.

4 What was one of the **major steps** toward the **rise of civilization** in **southern Mesopotamia**?

B



PREVIEW

Please [Sign In](#) or [Sign Up](#) to download the printable version of this worksheet

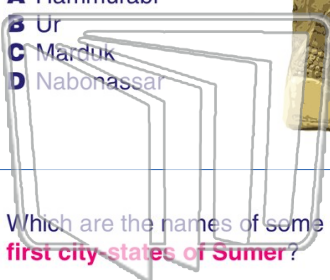
C

5

7

1992 B.C. and 1750 B.C.?

- A Hammurabi
- B Ur
- C Marduk
- D Nabonassar



symbols that were marked in clay.

- A pictographic
- B alphabetic
- C numeric
- D ancient Egyptian



NEW PATH LEARNING

9 Which are the names of some of the **first city-states of Sumer**?

- A Ur, Uruk, and Umma
- B Babylonia, Nineveh, and Assyria,
- C Sargon, Hammurabi, and Nebuchadnezzar
- D Gilgamesh, Israel, and Mesopotamia

10 During the **Babylonian Dynasty**, it may have been **Nebuchadnezzar II** commissioned the **creation** of the famous _____.

- A Great Pyramid
- B Assyrian army
- C Hammurabi's Code
- D Hanging Gardens of Babylon