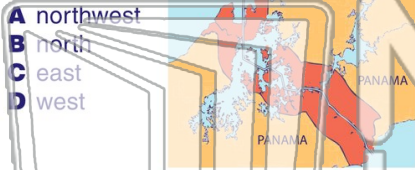




Name _____ Class _____ Date _____

1 South America is located **south** and _____ of the **Panama Canal**.



2 Some of South America's **major mineral resources** are **gold, silver, copper** and **oil**.

True or false?

- A true
- B false



3 In what century did the South American **Wars of Independence** take place?

4 The area known as **Patagonia**, used to mine bauxite and coal, lies in the **southernmost** part

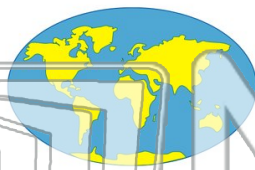


5

PREVIEW

Please [Sign In](#) or [Sign Up](#) to download the printable version of this worksheet

- 7
- A Brazil
 - B Ecuador
 - C Suriname
 - D Argentina



- A Lima
- B Rio De Janeiro
- C Buenos Aires
- D Portugal



9 Which of the following countries **does not** lie on the **Guiana Highlands**?

- A Columbia
- B Venezuela
- C Brazil
- D Argentina



10 Which South American country is the **largest** in area?

- A Brazil
- B Argentina
- C Mexico
- D Bolivia

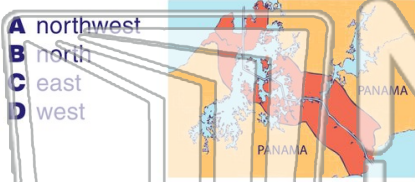




Name _____ Class _____ Date _____

1 South America is located **south** and _____ of the **Panama Canal**.

- A northwest
- B north
- C east
- D west



2 Some of South America's **major mineral resources** are **gold, silver, copper** and **oil**.

True or false?

- A true
- B false



3 In what century did the South American **Wars of Independence** take place?

4 The area known as **Patagonia**, used to mine bauxite and coal, lies in the **southernmost** part



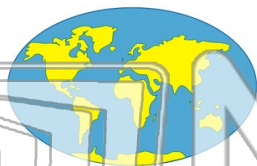
PREVIEW

Please [Sign In](#) or [Sign Up](#) to download the printable version of this worksheet

5

7

- A Brazil
- B Ecuador
- C Suriname
- D Argentina



- A Lima
- B Rio De Janeiro
- C Buenos Aires
- D Portugal



9 Which of the following countries **does not** lie on the **Guiana Highlands**?

- A Columbia
- B Venezuela
- C Brazil
- D Argentina



10 Which South American country is the **largest** in area?

- A Brazil
- B Argentina
- C Mexico
- D Bolivia

