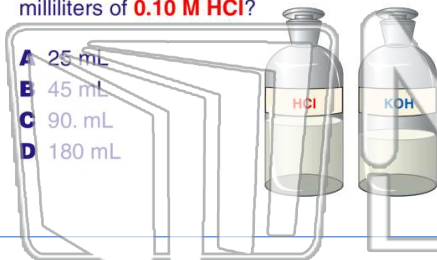




Name _____ Class _____ Date _____

- 1 How many milliliters of **0.20 M KOH** are needed to **completely neutralize** 90.0 milliliters of **0.10 M HCl**?

- A 25 mL
- B 45 mL
- C 90. mL
- D 180 mL



- 2 Which **0.1-molar aqueous solution** is the best **conductor of electricity**?

- A H₂S
- B HF
- C H₂SO₄
- D H₃PO₄



- 3 A solution has a **hydroxide ion** concentration of **1 x 10⁻⁵ M**. What is the **hydrogen ion concentration** of the solution?

- 4 How many **hydroxide ions** are needed to **completely neutralize** 1.0 liter of 0.50 M HCl?

5

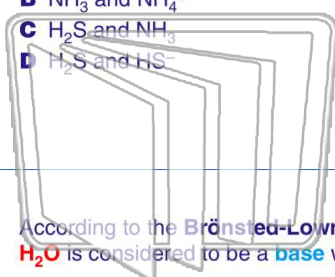


PREVIEW

Please [Sign In](#) or [Sign Up](#) to download the printable version of this worksheet

7

- A NH₃ and HS⁻
- B NH₃ and NH₄⁺
- C H₂S and NH₃
- D H₂S and HS⁻

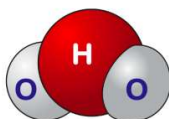


- A hydrogen ion
- B hydroxide ion
- C hydride ion
- D chloride ion



- 9 According to the **Brønsted-Lowry theory**, **H₂O** is considered to be a **base** when it

- A donates an electron
- B accepts an electron
- C donates a proton
- D accepts a proton



- 10 Given the **neutralization reaction**:



Which compound is a **salt**?

- A KOH
- B H₂SO₄
- C K₂SO₄
- D HOH



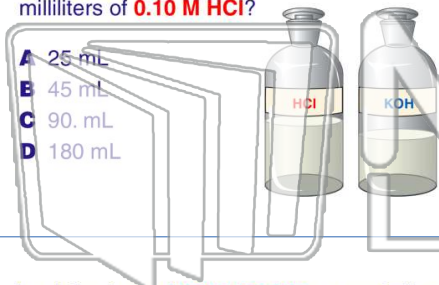


Name _____ Class _____ Date _____

1

How many milliliters of **0.20 M KOH** are needed to **completely neutralize** 90.0 milliliters of **0.10 M HCl**?

- A 25 mL
- B 45 mL
- C 90. mL
- D 180 mL



2

Which **0.1-molar aqueous solution** is the best **conductor of electricity**?

- A H₂S
- B HF
- C H₂SO₄
- D H₃PO₄



3

A solution has a **hydroxide ion** concentration of **1 x 10⁻⁵ M**. What is the **hydrogen ion concentration** of the solution?

4

How many **hydroxide ions** are needed to **completely neutralize** 1.0 liter of 0.50 M HCl?

5

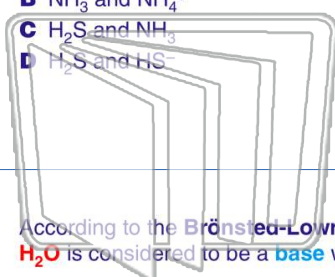


PREVIEW

Please [Sign In](#) or [Sign Up](#) to download the printable version of this worksheet

7

- A NH₃ and HS⁻
- B NH₃ and NH₄⁺
- C H₂S and NH₃
- D H₂S and HS⁻



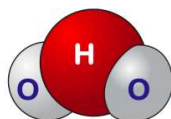
- A hydrogen ion
- B hydroxide ion
- C hydride ion
- D chloride ion



9

According to the **Brønsted-Lowry theory**, **H₂O** is considered to be a **base** when it

- A donates an electron
- B accepts an electron
- C donates a proton
- D accepts a proton



10

Given the **neutralization reaction**:



Which compound is a **salt**?

- A KOH
- B H₂SO₄
- C K₂SO₄
- D HOH

