

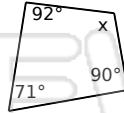
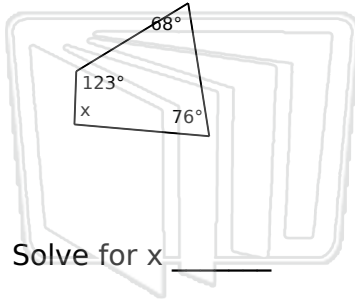


# Interior Angles of Quadrilaterals

Math

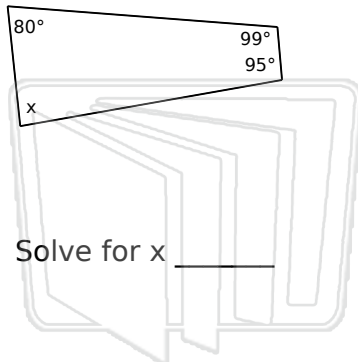
Name \_\_\_\_\_ Class \_\_\_\_\_ Date \_\_\_\_\_

Find the measure of the missing angle



## PREVIEW

Please [Sign In](#) or [Sign Up](#) to download the printable version of this worksheet





# Interior Angles of Quadrilaterals - Answer Key

Math

Name \_\_\_\_\_ Class \_\_\_\_\_ Date \_\_\_\_\_

Find the measure of the missing angle

Solve for x 93°

Solve for x 107°

Solve for x 80°

**PREVIEW**

Please [Sign In](#) or [Sign Up](#) to download the printable version of this worksheet

Solve for x 86°

Solve for x 90°

Solve for x 79°