

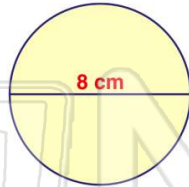


Name _____ Class _____ Date _____

1 What is the **circumference** of a circle with a **diameter of 8 centimeters**?

$C = \pi d$

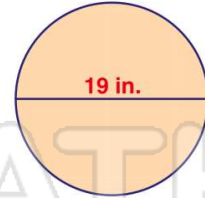
- A 25.32 centimeters
- B 22.56 centimeters
- C 25.12 centimeters
- D 24.13 centimeters



2 What is the **circumference** of a circle with a **diameter of 19 inches**?

$C = \pi d$

- A 76 inches
- B 59.66 inches
- C 57 inches
- D 43.88 inches



3 The **circumference** of a circle with a **diameter of 9 meters** is _____.

$C = \pi d$

4 What is the **circumference** of a circle with a **diameter of 6 meters**?

$C = \pi d$

5

7

Please [Sign In](#) or [Sign Up](#) to download the printable version of this worksheet

- B 54 centimeters
- C 48.87 centimeters
- D 81 centimeters

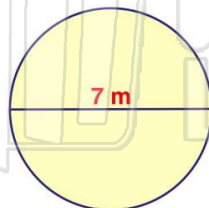
- B 82.40 inches
- C 134 inches
- D 40.82 inches

9 If $d = 7\text{ m}$, then $C = 21.14\text{ sq. m.}$

$C = \pi d$

True or false?

- A true
- B false

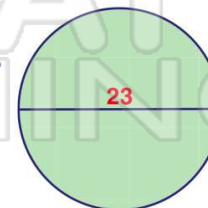


10 If $d = 23$, then $C = 72.22$.

$C = \pi d$

True or false?

- A true
- B false



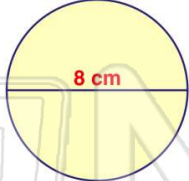


Name _____ Class _____ Date _____

1 What is the **circumference** of a circle with a **diameter of 8 centimeters**?

$C = \pi d$

A 25.32 centimeters
 B 22.56 centimeters
 C 25.12 centimeters
 D 24.13 centimeters

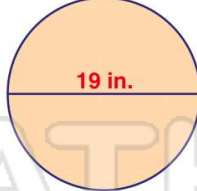


(C)

2 What is the **circumference** of a circle with a **diameter of 19 inches**?

$C = \pi d$


A 76 inches
 B 59.66 inches
 C 57 inches
 D 43.88 inches



(B)

3 The **circumference** of a circle with a **diameter of 9 meters** is _____.

$C = \pi d$



(D)

4 What is the **circumference** of a circle with a **diameter of 6 meters**?

$C = \pi d$



(A)




PREVIEW

Please [Sign In](#) or [Sign Up](#) to download the printable version of this worksheet

5

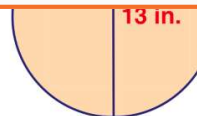
B 54 centimeters
 C 48.87 centimeters
 D 81 centimeters



(D)

6

B 82.40 inches
 C 134 inches
 D 40.82 inches



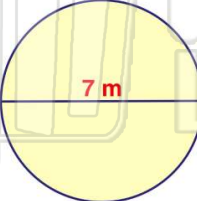
(D)

9 If $d = 7\text{ m}$, then $C = 21.14\text{ sq. m.}$

$C = \pi d$

True or false?

A true
 B false



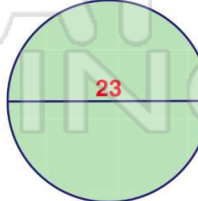
(B)

10 If $d = 23$, then $C = 72.22.$

$C = \pi d$

True or false?

A true
 B false



(A)